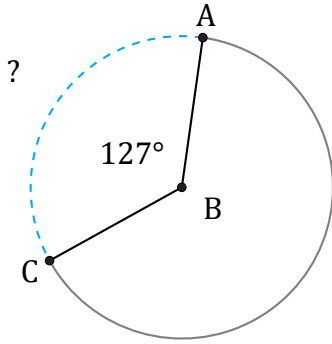


Arc Length (A)

Name: _____

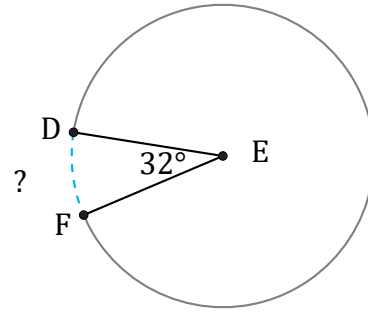
Date: _____

Calculate each arc length.



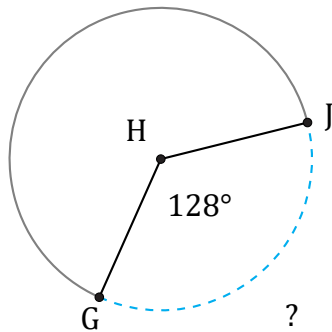
Diameter = 118 cm

$\widehat{AC} =$



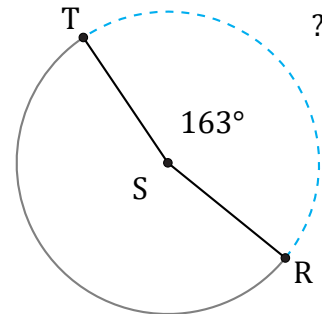
Diameter = 190 AU

$\widehat{DF} =$



Diameter = 20 m

$\widehat{GJ} =$



Diameter = 16 m

$\widehat{RT} =$