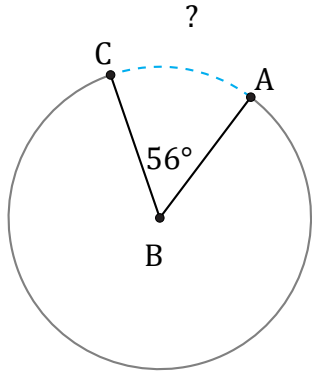


Arc Length (J)

Name: _____

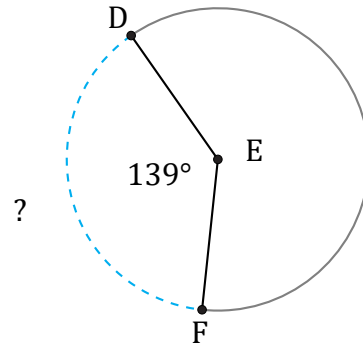
Date: _____

Calculate each arc length.



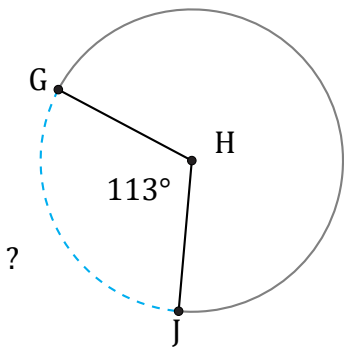
Circumference = 4360.53 mi

$\widehat{AC} =$



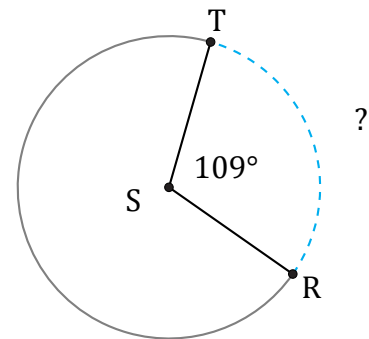
Circumference = 4272.57 km

$\widehat{DF} =$



Circumference = 929.91 mm

$\widehat{GJ} =$



Circumference = 251.33 in

$\widehat{RT} =$