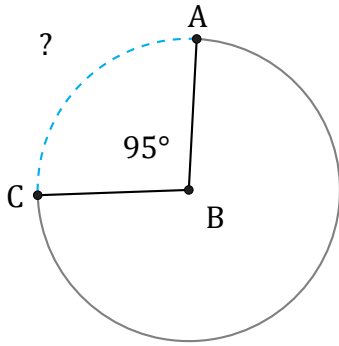


Arc Length (I)

Name: _____

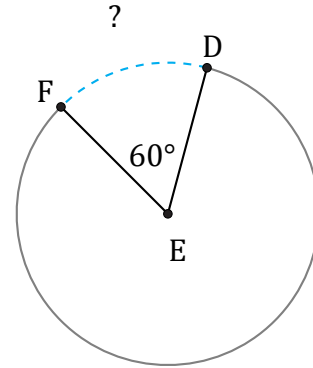
Date: _____

Calculate each arc length.



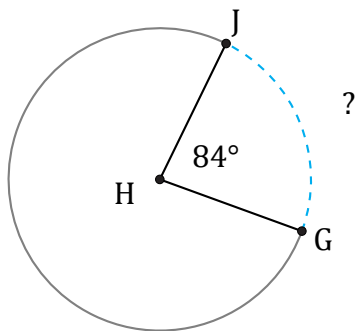
Circumference = 710 m

$\widehat{AC} =$



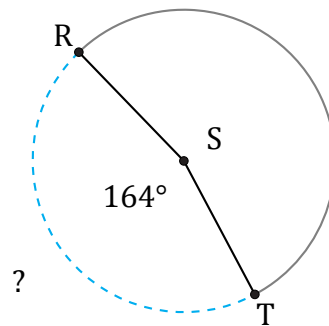
Circumference = 3989.82 in

$\widehat{DF} =$



Circumference = 94.25 mm

$\widehat{GJ} =$



Circumference = 56.55 AU

$\widehat{RT} =$