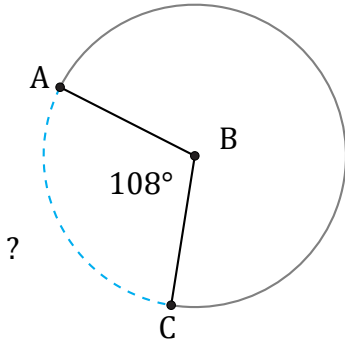


Arc Length (F)

Name: _____

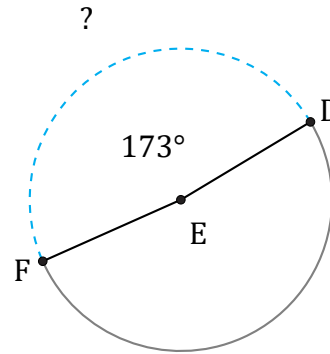
Date: _____

Calculate each arc length.



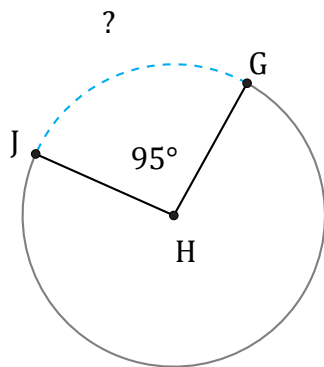
Circumference = 2557.26 mm

$\widehat{AC} =$



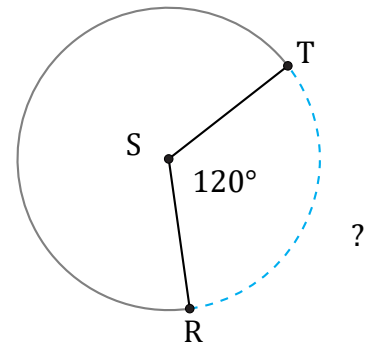
Circumference = 188.5 cm

$\widehat{DF} =$



Circumference = 4523.89 in

$\widehat{GJ} =$



Circumference = 18.85 mm

$\widehat{RT} =$