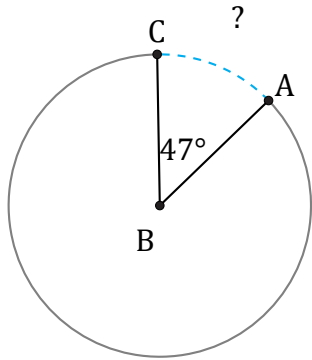


Arc Length (B)

Name: _____

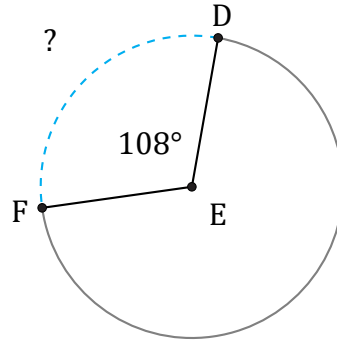
Date: _____

Calculate each arc length.



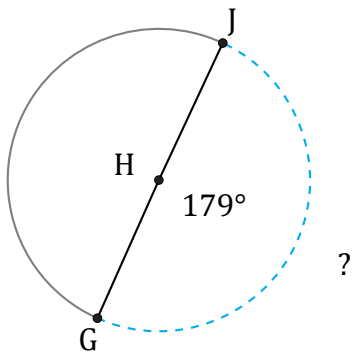
Circumference = 131.95 mi

$\widehat{AC} =$



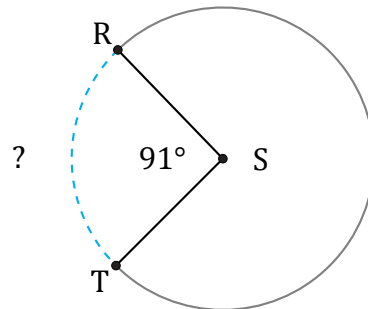
Circumference = 25.13 m

$\widehat{DF} =$



Circumference = 6.28 mm

$\widehat{GJ} =$



Circumference = 5108.23 m

$\widehat{RT} =$