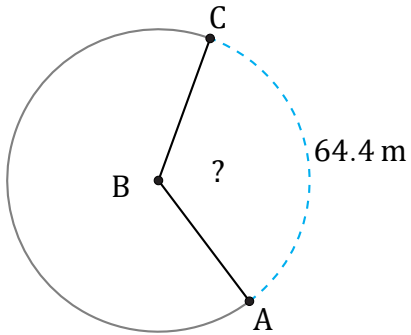


Arc Angles (F)

Name: _____

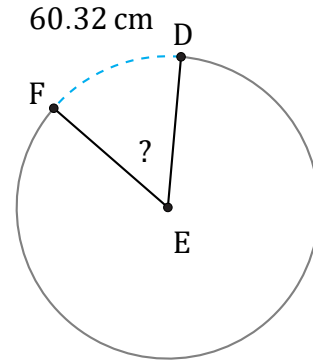
Date: _____

Calculate each arc angle measurement.



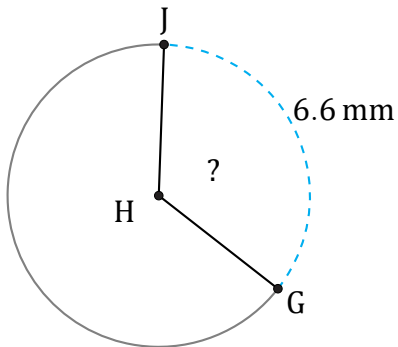
Radius = 30 m

$\angle ABC =$



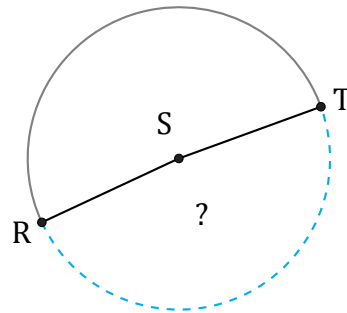
Radius = 64 cm

$\angle DEF =$



Radius = 3 mm

$\angle GHJ =$



Radius = 6 km

$\angle RST =$