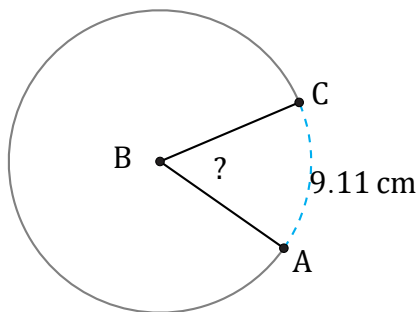


Arc Angles (C)

Name: _____

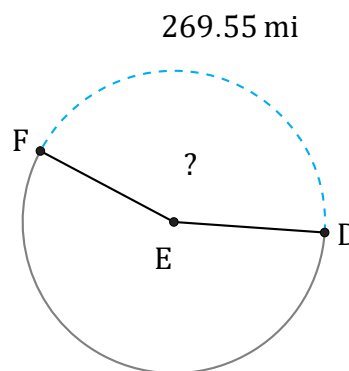
Date: _____

Calculate each arc angle measurement.



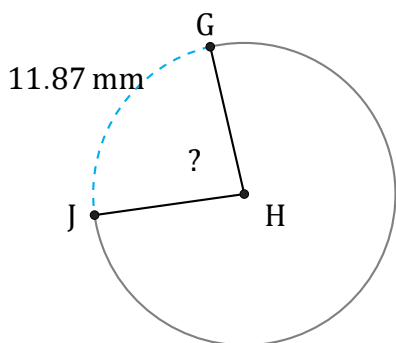
Radius = 9 cm

$\angle ABC =$



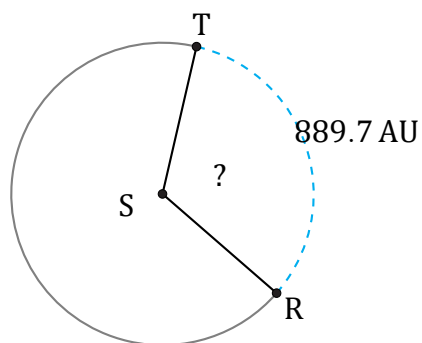
Radius = 99 mi

$\angle DEF =$



Radius = 8 mm

$\angle GHJ =$



Radius = 432 AU

$\angle RST =$