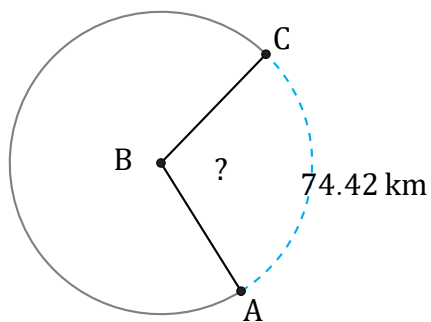


Arc Angles (A)

Name: _____

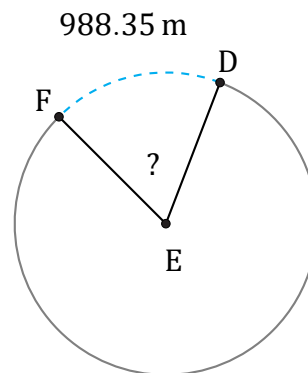
Date: _____

Calculate each arc angle measurement.



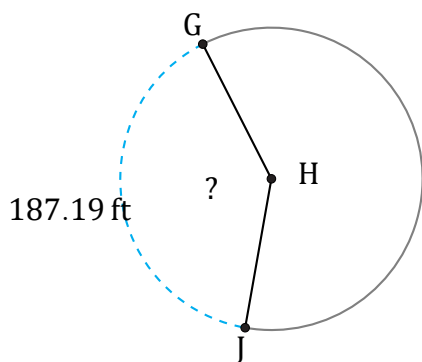
Diameter = 82 km

$\angle ABC =$



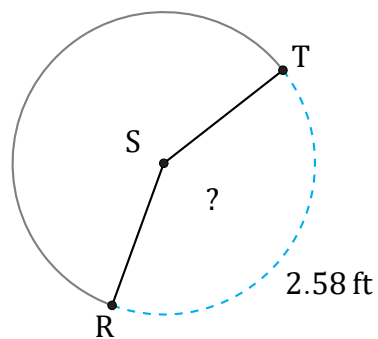
Diameter = 1716 m

$\angle DEF =$



Diameter = 150 ft

$\angle GHJ =$



Diameter = 2 ft

$\angle RST =$