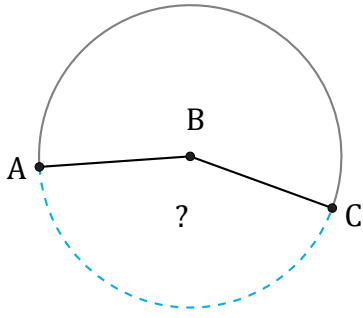


Arc Angles (H)

Name: _____

Date: _____

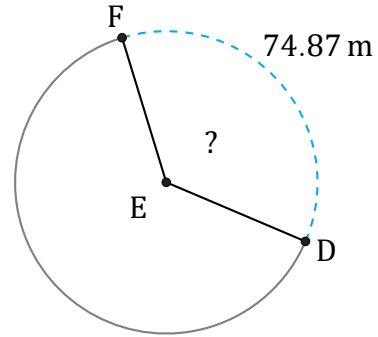
Calculate each arc angle measurement.



16.34 m

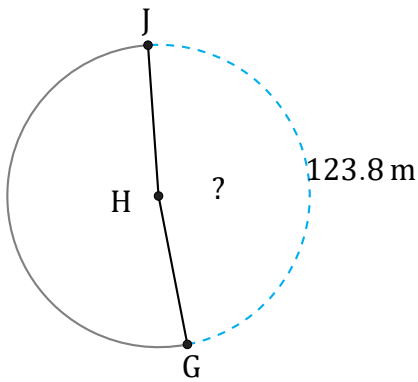
Circumference = 37.7 m

$\angle ABC =$ _____



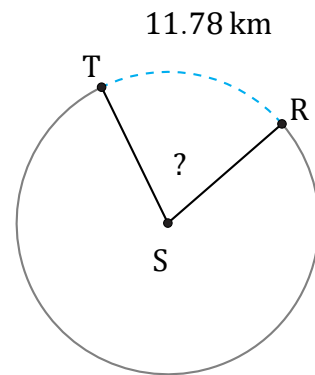
Circumference = 207.35 m

$\angle DEF =$ _____



Circumference = 257.61 m

$\angle GHJ =$ _____



Circumference = 56.55 km

$\angle RST =$ _____