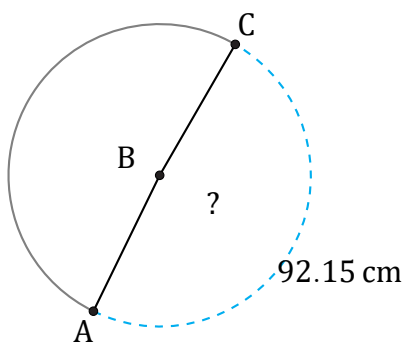


# Arc Angles (G)

Name: \_\_\_\_\_

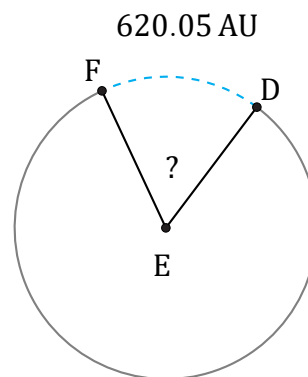
Date: \_\_\_\_\_

Calculate each arc angle measurement.



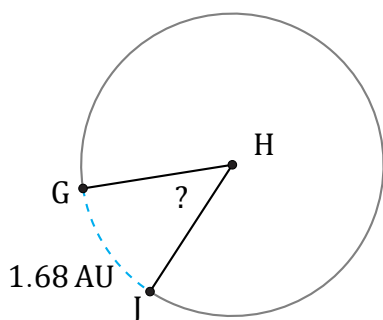
Circumference = 188.5 cm

$\angle ABC =$



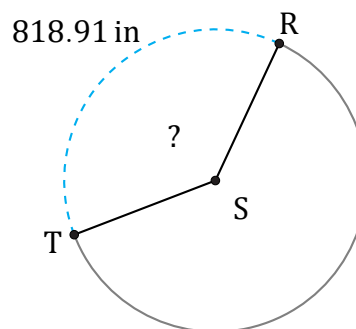
Circumference = 3600.27 AU

$\angle DEF =$



Circumference = 12.57 AU

$\angle GHJ =$



Circumference = 2167.7 in

$\angle RST =$