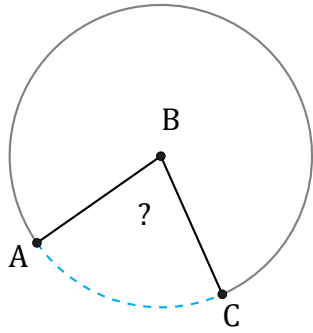


Arc Angles (F)

Name: _____

Date: _____

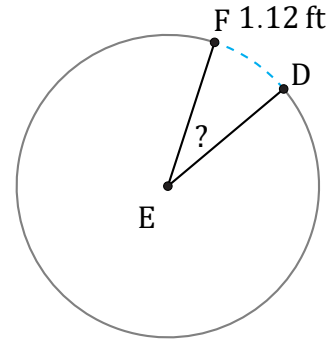
Calculate each arc angle measurement.



103.41 mm

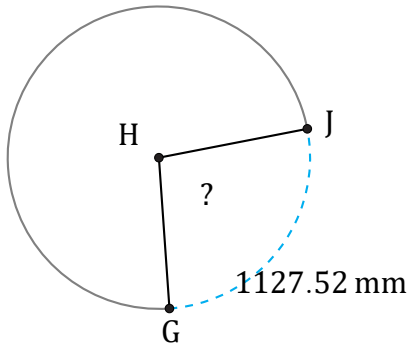
Circumference = 471.24 mm

$\angle ABC =$



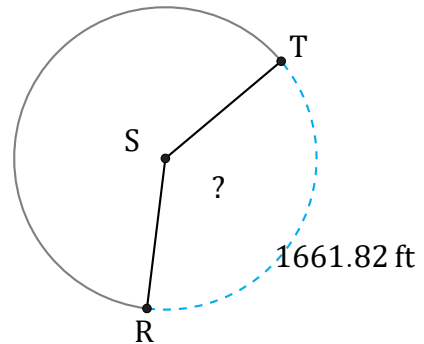
Circumference = 12.57 ft

$\angle DEF =$



Circumference = 4184.6 mm

$\angle GHJ =$



Circumference = 4366.81 ft

$\angle RST =$