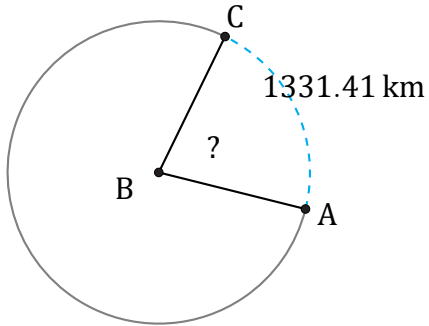


Arc Angles (C)

Name: _____

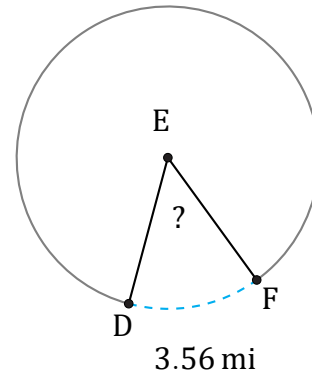
Date: _____

Calculate each arc angle measurement.



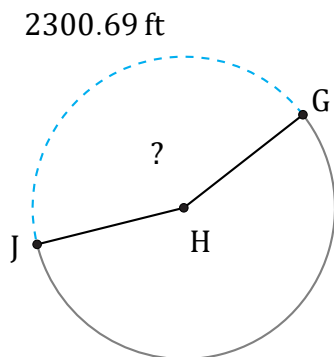
Circumference = 6144.96 km

$\angle ABC =$



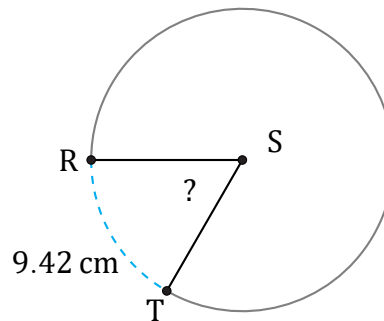
Circumference = 25.13 mi

$\angle DEF =$



Circumference = 5309.29 ft

$\angle GHJ =$



Circumference = 56.55 cm

$\angle RST =$