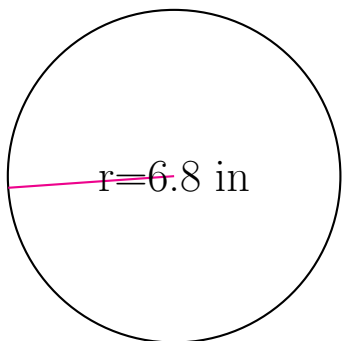


Circle Measurements (A)

Calculate each circles measurements using the given measurement.

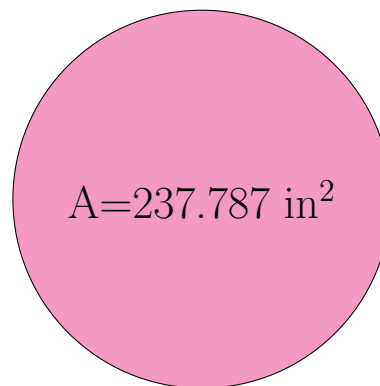


radius = 6.8 in

diameter = _____

circumference = _____

area = _____

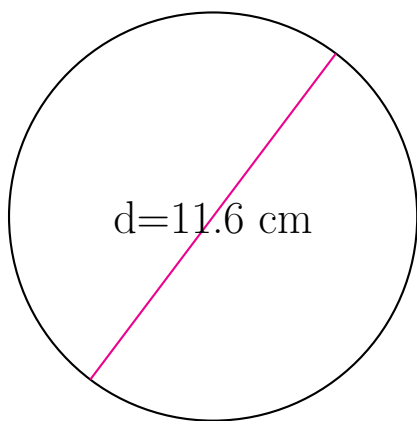


radius = _____

diameter = _____

circumference = _____

area = 237.787 in²

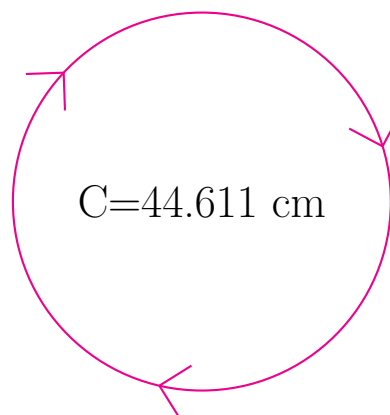


radius = _____

diameter = 11.6 cm

circumference = _____

area = _____



radius = _____

diameter = _____

circumference = 44.611 cm

area = _____