
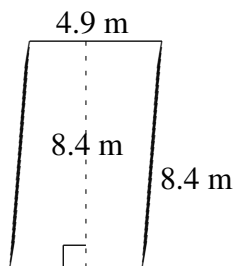
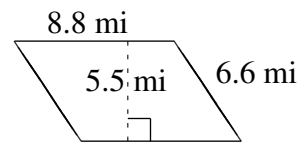
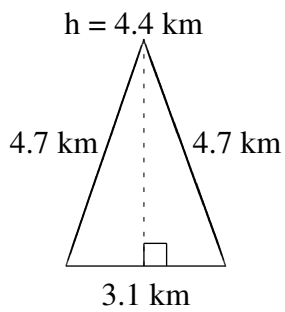
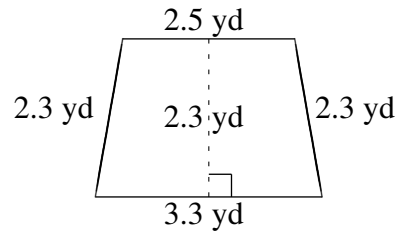
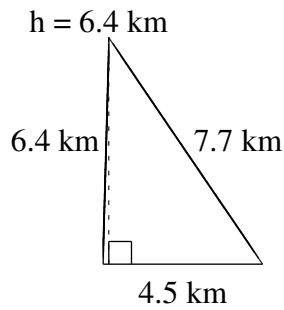


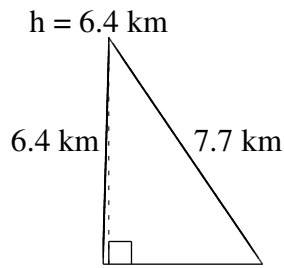
# Area and Perimeter of Various Shapes (J)

Find the area and perimeter of each shape.

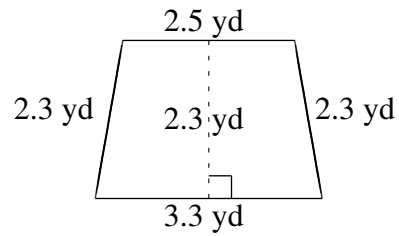


# Area and Perimeter of Various Shapes (J) Answers

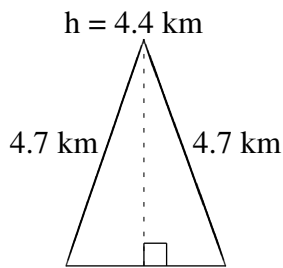
Find the area and perimeter of each shape.



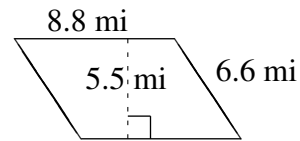
$$A = 14.40 \text{ km}^2$$
$$P = 18.6 \text{ km}$$



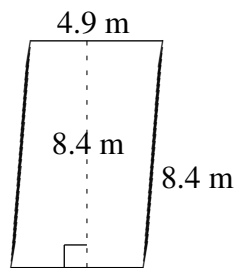
$$A = 6.67 \text{ yd}^2$$
$$P = 10.4 \text{ yd}$$




$$A = 6.82 \text{ km}^2$$
$$P = 12.5 \text{ km}$$



$$A = 48.40 \text{ mi}^2$$
$$P = 30.8 \text{ mi}$$



$$A = 41.16 \text{ m}^2$$
$$P = 26.6 \text{ m}$$



$$A = 12.90 \text{ ft}^2$$
$$P = 20.2 \text{ ft}$$