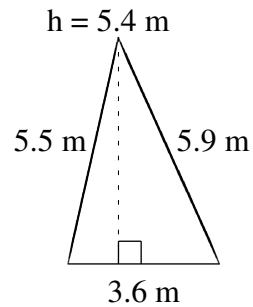
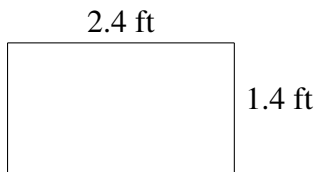
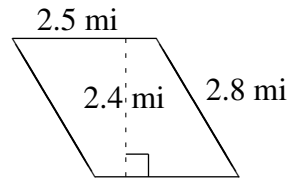
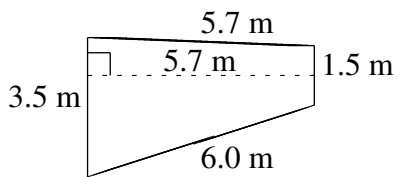
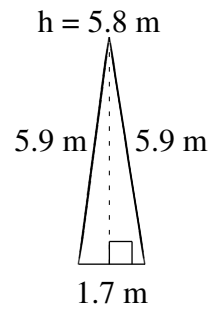
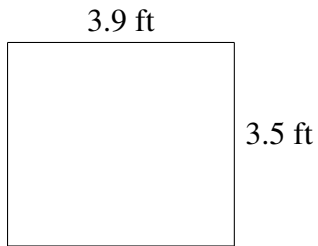


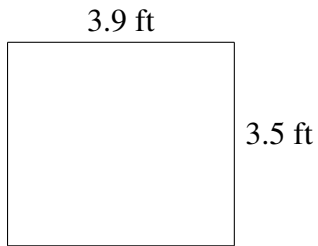
Area and Perimeter of Various Shapes (G)

Find the area and perimeter of each shape.

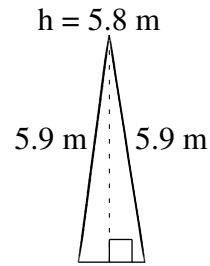


Area and Perimeter of Various Shapes (G) Answers

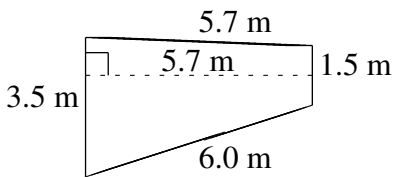
Find the area and perimeter of each shape.



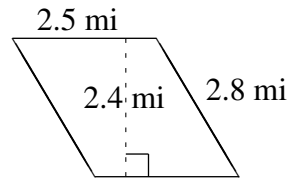
$$A = 13.65 \text{ ft}^2$$
$$P = 14.8 \text{ ft}$$



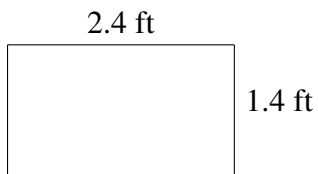
$$1.7 \text{ m}$$
$$A = 4.93 \text{ m}^2$$
$$P = 13.5 \text{ m}$$



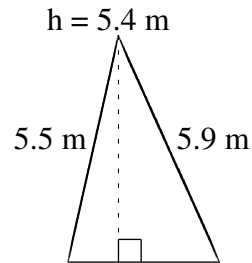
$$A = 14.25 \text{ m}^2$$
$$P = 16.7 \text{ m}$$



$$A = 6.00 \text{ mi}^2$$
$$P = 10.6 \text{ mi}$$



$$A = 3.36 \text{ ft}^2$$
$$P = 7.6 \text{ ft}$$



$$3.6 \text{ m}$$
$$A = 9.72 \text{ m}^2$$
$$P = 15.0 \text{ m}$$