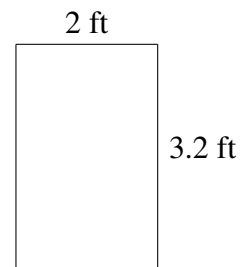
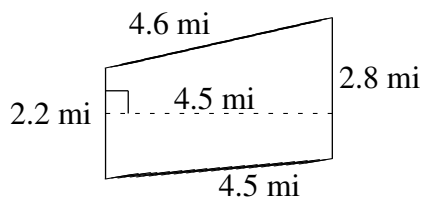
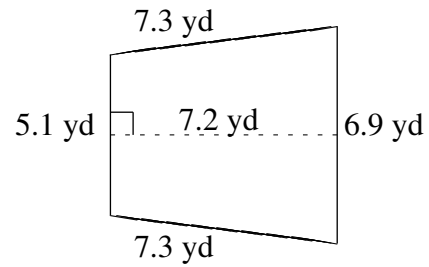
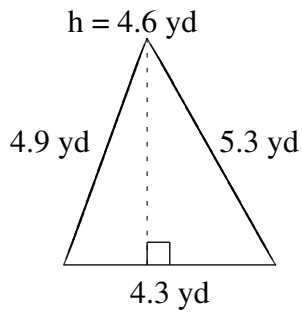
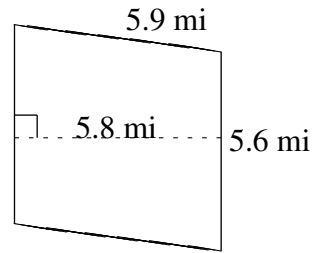
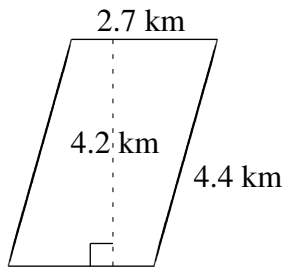


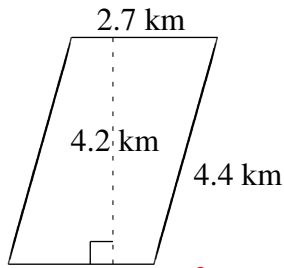
# Area and Perimeter of Various Shapes (A)

Find the area and perimeter of each shape.

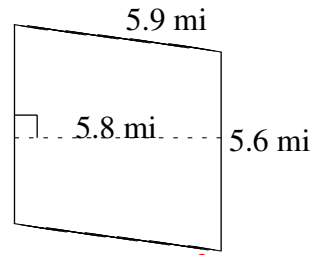


# Area and Perimeter of Various Shapes (A) Answers

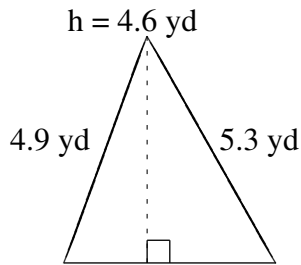
Find the area and perimeter of each shape.



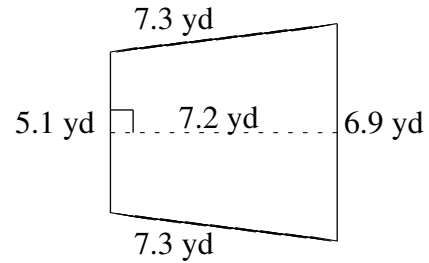
$A = 11.34 \text{ km}^2$   
 $P = 14.2 \text{ km}$



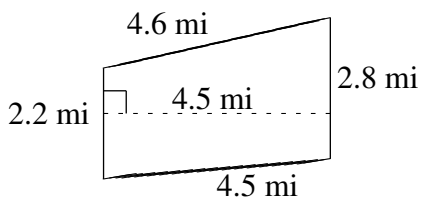
$A = 32.48 \text{ mi}^2$   
 $P = 23.0 \text{ mi}$



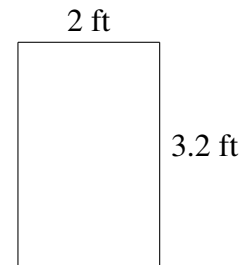
$A = 9.89 \text{ yd}^2$   
 $P = 14.5 \text{ yd}$



$A = 43.20 \text{ yd}^2$   
 $P = 26.6 \text{ yd}$



$A = 11.25 \text{ mi}^2$   
 $P = 14.1 \text{ mi}$



$A = 6.4 \text{ ft}^2$   
 $P = 10.4 \text{ ft}$