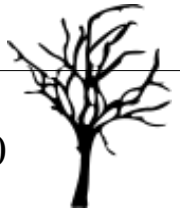


Through the Dark Forest (E)

Find each sum to find your way through the forest.



$$\begin{array}{r} 58 \\ + 74 \\ \hline \end{array}$$

$$\begin{array}{r} 30 \\ + 31 \\ \hline \end{array}$$

$$\begin{array}{r} 80 \\ + 18 \\ \hline \end{array}$$



$$\begin{array}{r} 23 \\ + 21 \\ \hline \end{array}$$



$$\begin{array}{r} 84 \\ + 15 \\ \hline \end{array}$$

$$\begin{array}{r} 76 \\ + 10 \\ \hline \end{array}$$



$$\begin{array}{r} 76 \\ + 10 \\ \hline \end{array}$$



$$\begin{array}{r} 13 \\ + 42 \\ \hline \end{array}$$



$$\begin{array}{r} 71 \\ + 61 \\ \hline \end{array}$$



$$\begin{array}{r} 14 \\ + 44 \\ \hline \end{array}$$

$$\begin{array}{r} 87 \\ + 84 \\ \hline \end{array}$$



$$\begin{array}{r} 14 \\ + 84 \\ \hline \end{array}$$



$$\begin{array}{r} 52 \\ + 22 \\ \hline \end{array}$$



$$\begin{array}{r} 79 \\ + 60 \\ \hline \end{array}$$

$$\begin{array}{r} 26 \\ + 22 \\ \hline \end{array}$$

$$\begin{array}{r} 77 \\ + 66 \\ \hline \end{array}$$

$$\begin{array}{r} 58 \\ + 24 \\ \hline \end{array}$$



$$\begin{array}{r} 51 \\ + 93 \\ \hline \end{array}$$



$$\begin{array}{r} 65 \\ + 27 \\ \hline \end{array}$$



$$\begin{array}{r} 32 \\ + 41 \\ \hline \end{array}$$

$$\begin{array}{r} 93 \\ + 14 \\ \hline \end{array}$$



$$\begin{array}{r} 24 \\ + 52 \\ \hline \end{array}$$




$$\begin{array}{r} 87 \\ + 49 \\ \hline \end{array}$$



$$\begin{array}{r} 88 \\ + 86 \\ \hline \end{array}$$





$$\begin{array}{r} 75 \\ + 49 \\ \hline \end{array}$$





Through the Dark Forest (E) Answers

Find each sum to find your way through the forest.




$$\begin{array}{r} 58 \\ + 74 \\ \hline 132 \end{array}$$




$$\begin{array}{r} 80 \\ + 18 \\ \hline 98 \end{array}$$
$$\begin{array}{r} 30 \\ + 31 \\ \hline 61 \end{array}$$
$$\begin{array}{r} 23 \\ + 21 \\ \hline 44 \end{array}$$
$$\begin{array}{r} 84 \\ + 15 \\ \hline 99 \end{array}$$





$$\begin{array}{r} 76 \\ + 10 \\ \hline 86 \end{array}$$




$$\begin{array}{r} 76 \\ + 10 \\ \hline 86 \end{array}$$
$$\begin{array}{r} 13 \\ + 42 \\ \hline 55 \end{array}$$




$$\begin{array}{r} 71 \\ + 61 \\ \hline 132 \end{array}$$


$$\begin{array}{r} 14 \\ + 84 \\ \hline 98 \end{array}$$
$$\begin{array}{r} 14 \\ + 44 \\ \hline 58 \end{array}$$
$$\begin{array}{r} 52 \\ + 22 \\ \hline 74 \end{array}$$



$$\begin{array}{r} 87 \\ + 84 \\ \hline 171 \end{array}$$



$$\begin{array}{r} 26 \\ + 22 \\ \hline 48 \end{array}$$
$$\begin{array}{r} 77 \\ + 66 \\ \hline 143 \end{array}$$
$$\begin{array}{r} 58 \\ + 24 \\ \hline 82 \end{array}$$




$$\begin{array}{r} 79 \\ + 60 \\ \hline 139 \end{array}$$
$$\begin{array}{r} 51 \\ + 93 \\ \hline 144 \end{array}$$


$$\begin{array}{r} 65 \\ + 27 \\ \hline 92 \end{array}$$
$$\begin{array}{r} 32 \\ + 41 \\ \hline 73 \end{array}$$
$$\begin{array}{r} 93 \\ + 14 \\ \hline 107 \end{array}$$

$$\begin{array}{r} 24 \\ + 52 \\ \hline 76 \end{array}$$


$$\begin{array}{r} 87 \\ + 49 \\ \hline 136 \end{array}$$


$$\begin{array}{r} 88 \\ + 86 \\ \hline 174 \end{array}$$


$$\begin{array}{r} 75 \\ + 49 \\ \hline 124 \end{array}$$