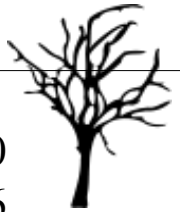


Through the Dark Forest (C)

Find each sum to find your way through the forest.



$$\begin{array}{r} 88 \\ + 69 \\ \hline \end{array}$$

$$\begin{array}{r} 40 \\ + 96 \\ \hline \end{array}$$

$$\begin{array}{r} 90 \\ + 81 \\ \hline \end{array}$$



$$\begin{array}{r} 19 \\ + 44 \\ \hline \end{array}$$



$$\begin{array}{r} 36 \\ + 79 \\ \hline \end{array}$$

$$\begin{array}{r} 30 \\ + 65 \\ \hline \end{array}$$



$$\begin{array}{r} 69 \\ + 92 \\ \hline \end{array}$$



$$\begin{array}{r} 40 \\ + 19 \\ \hline \end{array}$$



$$\begin{array}{r} 69 \\ + 28 \\ \hline \end{array}$$



$$\begin{array}{r} 79 \\ + 83 \\ \hline \end{array}$$

$$\begin{array}{r} 34 \\ + 93 \\ \hline \end{array}$$

$$\begin{array}{r} 45 \\ + 87 \\ \hline \end{array}$$

$$\begin{array}{r} 91 \\ + 14 \\ \hline \end{array}$$



$$\begin{array}{r} 75 \\ + 24 \\ \hline \end{array}$$



$$\begin{array}{r} 29 \\ + 11 \\ \hline \end{array}$$

$$\begin{array}{r} 76 \\ + 24 \\ \hline \end{array}$$

$$\begin{array}{r} 75 \\ + 24 \\ \hline \end{array}$$

$$\begin{array}{r} 70 \\ + 25 \\ \hline \end{array}$$



$$\begin{array}{r} 33 \\ + 84 \\ \hline \end{array}$$

$$\begin{array}{r} 67 \\ + 88 \\ \hline \end{array}$$

$$\begin{array}{r} 20 \\ + 83 \\ \hline \end{array}$$

$$\begin{array}{r} 37 \\ + 71 \\ \hline \end{array}$$

$$\begin{array}{r} 33 \\ + 84 \\ \hline \end{array}$$

$$\begin{array}{r} 67 \\ + 88 \\ \hline \end{array}$$



$$\begin{array}{r} 24 \\ + 18 \\ \hline \end{array}$$



$$\begin{array}{r} 20 \\ + 17 \\ \hline \end{array}$$



$$\begin{array}{r} 38 \\ + 46 \\ \hline \end{array}$$

$$\begin{array}{r} 37 \\ + 71 \\ \hline \end{array}$$


$$\begin{array}{r} 67 \\ + 99 \\ \hline \end{array}$$







Through the Dark Forest (C) Answers


Find each sum to find your way through the forest.



$$\begin{array}{r} 88 \\ + 69 \\ \hline 157 \end{array}$$


$$\begin{array}{r} 90 \\ + 81 \\ \hline 171 \end{array}$$


$$\begin{array}{r} 40 \\ + 96 \\ \hline 136 \end{array}$$
$$\begin{array}{r} 19 \\ + 44 \\ \hline 63 \end{array}$$
$$\begin{array}{r} 36 \\ + 79 \\ \hline 115 \end{array}$$



$$\begin{array}{r} 30 \\ + 65 \\ \hline 95 \end{array}$$




$$\begin{array}{r} 69 \\ + 92 \\ \hline 161 \end{array}$$


$$\begin{array}{r} 40 \\ + 19 \\ \hline 59 \end{array}$$


$$\begin{array}{r} 69 \\ + 28 \\ \hline 97 \end{array}$$




$$\begin{array}{r} 45 \\ + 87 \\ \hline 132 \end{array}$$



$$\begin{array}{r} 79 \\ + 83 \\ \hline 162 \end{array}$$



$$\begin{array}{r} 91 \\ + 14 \\ \hline 105 \end{array}$$



$$\begin{array}{r} 76 \\ + 24 \\ \hline 100 \end{array}$$



$$\begin{array}{r} 75 \\ + 24 \\ \hline 99 \end{array}$$
$$\begin{array}{r} 70 \\ + 25 \\ \hline 95 \end{array}$$


$$\begin{array}{r} 29 \\ + 11 \\ \hline 40 \end{array}$$
$$\begin{array}{r} 20 \\ + 83 \\ \hline 103 \end{array}$$



$$\begin{array}{r} 37 \\ + 71 \\ \hline 108 \end{array}$$


$$\begin{array}{r} 33 \\ + 84 \\ \hline 117 \end{array}$$
$$\begin{array}{r} 67 \\ + 88 \\ \hline 155 \end{array}$$

$$\begin{array}{r} 24 \\ + 18 \\ \hline 42 \end{array}$$


$$\begin{array}{r} 20 \\ + 17 \\ \hline 37 \end{array}$$


$$\begin{array}{r} 67 \\ + 99 \\ \hline 166 \end{array}$$


$$\begin{array}{r} 38 \\ + 46 \\ \hline 84 \end{array}$$