


Through the Dark Forest (D)

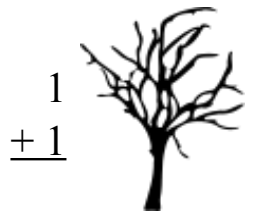
Find each sum to find your way through the forest.



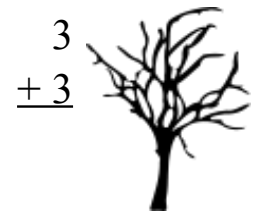
$$\begin{array}{r} 2 \\ +9 \\ \hline \end{array}$$



$$\begin{array}{r} 7 \\ +9 \\ \hline \end{array}$$



$$\begin{array}{r} 1 \\ +1 \\ \hline \end{array}$$



$$\begin{array}{r} 3 \\ +3 \\ \hline \end{array}$$

$$\begin{array}{r} 7 \\ +7 \\ \hline \end{array}$$



$$\begin{array}{r} 2 \\ +5 \\ \hline \end{array}$$



$$\begin{array}{r} 4 \\ +5 \\ \hline \end{array}$$



$$\begin{array}{r} 3 \\ +5 \\ \hline \end{array}$$



$$\begin{array}{r} 6 \\ +6 \\ \hline \end{array}$$



$$\begin{array}{r} 3 \\ +5 \\ \hline \end{array}$$

$$\begin{array}{r} 6 \\ +1 \\ \hline \end{array}$$

$$\begin{array}{r} 9 \\ +3 \\ \hline \end{array}$$



$$\begin{array}{r} 5 \\ +2 \\ \hline \end{array}$$



$$\begin{array}{r} 4 \\ +2 \\ \hline \end{array}$$



$$\begin{array}{r} 8 \\ +4 \\ \hline \end{array}$$

$$\begin{array}{r} 6 \\ +3 \\ \hline \end{array}$$

$$\begin{array}{r} 6 \\ +9 \\ \hline \end{array}$$



$$\begin{array}{r} 6 \\ +3 \\ \hline \end{array}$$



$$\begin{array}{r} 7 \\ +7 \\ \hline \end{array}$$

$$\begin{array}{r} 9 \\ +4 \\ \hline \end{array}$$

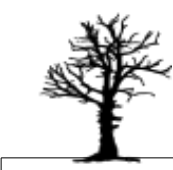


$$\begin{array}{r} 3 \\ +2 \\ \hline \end{array}$$

$$\begin{array}{r} 4 \\ +7 \\ \hline \end{array}$$



$$\begin{array}{r} 7 \\ +2 \\ \hline \end{array}$$



$$\begin{array}{r} 4 \\ +3 \\ \hline \end{array}$$



$$\begin{array}{r} 7 \\ +4 \\ \hline \end{array}$$



Through the Dark Forest (D) Answers

Find each sum to find your way through the forest.

$$\begin{array}{r} 7 \\ +9 \\ \hline 16 \end{array}$$

$$\begin{array}{r} 1 \\ +1 \\ \hline 2 \end{array}$$

$$\begin{array}{r} 2 \\ +9 \\ \hline 11 \end{array}$$

$$\begin{array}{r} 3 \\ +3 \\ \hline 6 \end{array}$$

$$\begin{array}{r} 7 \\ +7 \\ \hline 14 \end{array}$$

$$\begin{array}{r} 2 \\ +5 \\ \hline 7 \end{array}$$

$$\begin{array}{r} 4 \\ +5 \\ \hline 9 \end{array}$$

$$\begin{array}{r} 3 \\ +5 \\ \hline 8 \end{array}$$

$$\begin{array}{r} 6 \\ +6 \\ \hline 12 \end{array}$$

$$\begin{array}{r} 9 \\ +3 \\ \hline 12 \end{array}$$

$$\begin{array}{r} 5 \\ +2 \\ \hline 7 \end{array}$$

$$\begin{array}{r} 6 \\ +1 \\ \hline 7 \end{array}$$

$$\begin{array}{r} 3 \\ +5 \\ \hline 8 \end{array}$$

$$\begin{array}{r} 6 \\ +3 \\ \hline 9 \end{array}$$

$$\begin{array}{r} 4 \\ +2 \\ \hline 6 \end{array}$$

$$\begin{array}{r} 8 \\ +4 \\ \hline 12 \end{array}$$

$$\begin{array}{r} 6 \\ +3 \\ \hline 9 \end{array}$$

$$\begin{array}{r} 7 \\ +7 \\ \hline 14 \end{array}$$

$$\begin{array}{r} 9 \\ +4 \\ \hline 13 \end{array}$$

$$\begin{array}{r} 4 \\ +7 \\ \hline 11 \end{array}$$

$$\begin{array}{r} 3 \\ +2 \\ \hline 5 \end{array}$$

$$\begin{array}{r} 7 \\ +2 \\ \hline 9 \end{array}$$

$$\begin{array}{r} 4 \\ +3 \\ \hline 7 \end{array}$$

$$\begin{array}{r} 7 \\ +4 \\ \hline 11 \end{array}$$