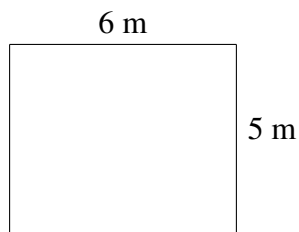

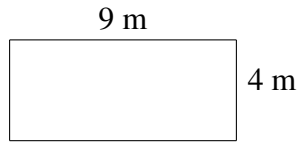


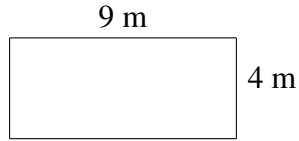
Monster Yards (H)

Which monster has the yard with the greatest area? Greatest perimeter?




Monster Yards (H) Answers

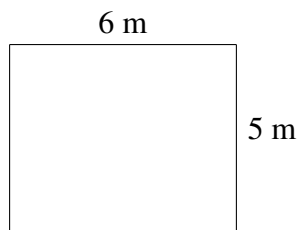
Which monster has the yard with the greatest area? Greatest perimeter?



$$A = 36 \text{ m}^2$$
$$P = 26 \text{ m}$$



$$A = 18 \text{ m}^2$$
$$P = 22 \text{ m}$$



$$A = 30 \text{ m}^2$$
$$P = 22 \text{ m}$$