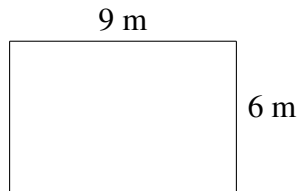
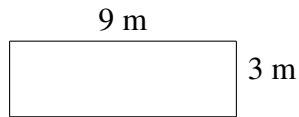




Monster Yards (B)

Which monster has the yard with the greatest area? Greatest perimeter?

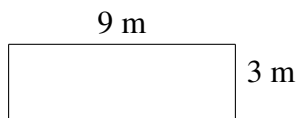


Monster Yards (B) Answers

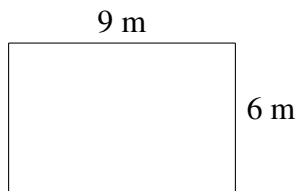
Which monster has the yard with the greatest area? Greatest perimeter?



$$A = 3 \text{ m}^2$$
$$P = 8 \text{ m}$$



$$A = 27 \text{ m}^2$$
$$P = 24 \text{ m}$$



$$A = 54 \text{ m}^2$$
$$P = 30 \text{ m}$$