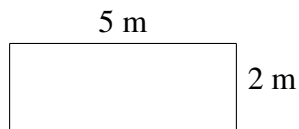
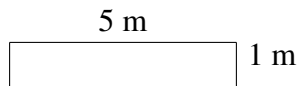
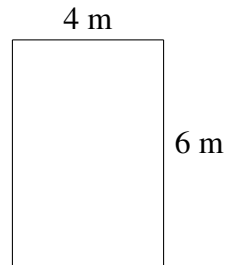


Monster Yards (A)

Which monster has the yard with the greatest area? Greatest perimeter?



Monster Yards (A) Answers

Which monster has the yard with the greatest area? Greatest perimeter?

