

HALLOWEEN COUNTING (H)


Name: _____

Date: _____

Score: _____ /4

Count the number of items in each group, if you dare!

1. There are witches.




2. There are jack-o'-lanterns.



3. There are bats.



4. There are ghosts.



HALLOWEEN COUNTING (H) ANSWERS


Name: _____

Date: _____

Score: _____ /4

Count the number of items in each group, if you dare!

1. There are witches.



2. There are jack-o'-lanterns.



3. There are bats.



4. There are ghosts.

