

HALLOWEEN COUNTING (A)


Name: _____

Date: _____

Score: _____ /4

Count the number of items in each group, if you dare!

1. There are ghosts.




2. There are jack-o'-lanterns.



3. There are bats.



4. There are witches.



HALLOWEEN COUNTING (A) ANSWERS


Name: _____

Date: _____

Score: _____ /4

Count the number of items in each group, if you dare!

1. There are ghosts.



2. There are jack-o'-lanterns.



3. There are bats.



4. There are witches.

