

HALLOWEEN COUNTING (A)

Name: _____

Date: _____


Score: _____ /4

Count the number of items in each group, if you dare!


1. There are jack-o'-lanterns.



2. There are bats.



3. There are ghosts.



4. There are witches.



HALLOWEEN COUNTING (A) ANSWERS

Name: _____

Date: _____


Score: _____ /4

Count the number of items in each group, if you dare!


1. There are jack-o'-lanterns.



2. There are bats.



3. There are ghosts.



4. There are witches.

