

# HALLOWEEN COUNTING (F)


Name: \_\_\_\_\_

Date: \_\_\_\_\_


Score: \_\_\_\_\_ /4

Count the number of items in each group, if you dare!


1. There are  witches.



2. There are  ghosts.



3. There are  bats.



4. There are  jack-o'-lanterns.



# HALLOWEEN COUNTING (F) ANSWERS


Name: \_\_\_\_\_

Date: \_\_\_\_\_


Score: \_\_\_\_\_ /4

Count the number of items in each group, if you dare!


1. There are  witches.



2. There are  ghosts.



3. There are  bats.



4. There are  jack-o'-lanterns.

