

GHOSTLY FIGURES MISSING DIGITS ADDITION AND SUBTRACTION (A)

Name: _____

Date: _____

Score: _____

Fill in the digits that have mysteriously disappeared.

1.
$$\begin{array}{r} 75 \\ + \\ \hline 604 \end{array}$$



2.
$$\begin{array}{r} 53 \\ - 64 \\ \hline 82 \end{array}$$



3.
$$\begin{array}{r} 304 \\ - 07 \\ \hline 8 \end{array}$$



4.
$$\begin{array}{r} 85 \\ - 6 \\ \hline 100 \end{array}$$



5.
$$\begin{array}{r} 91 \\ + 22 \\ \hline 3 \end{array}$$



6.
$$\begin{array}{r} 692 \\ - 6 \\ \hline 21 \end{array}$$



7.
$$\begin{array}{r} 889 \\ + 7 \\ \hline 01 \end{array}$$



8.
$$\begin{array}{r} 51 \\ - 64 \\ \hline 48 \end{array}$$



9.
$$\begin{array}{r} 54 \\ + 31 \\ \hline 59 \end{array}$$



10.
$$\begin{array}{r} 936 \\ + 5 \\ \hline 60 \end{array}$$



11.
$$\begin{array}{r} 82 \\ + 5 \\ \hline 82 \end{array}$$



12.
$$\begin{array}{r} 54 \\ + 17 \\ \hline 64 \end{array}$$



13.
$$\begin{array}{r} 63 \\ + 1 \\ \hline 996 \end{array}$$



14.
$$\begin{array}{r} 88 \\ - 6 \\ \hline 76 \end{array}$$



15.
$$\begin{array}{r} 35 \\ - 93 \\ \hline 53 \end{array}$$



16.
$$\begin{array}{r} 1 \\ + 468 \\ \hline 08 \end{array}$$



17.
$$\begin{array}{r} 94 \\ - 610 \\ \hline 6 \end{array}$$



18.
$$\begin{array}{r} 49 \\ - 357 \\ \hline 2 \end{array}$$



19.
$$\begin{array}{r} 87 \\ + 2 \\ \hline 076 \end{array}$$



20.
$$\begin{array}{r} 90 \\ - 35 \\ \hline 4 \end{array}$$



GHOSTLY FIGURES MISSING DIGITS ADDITION AND SUBTRACTION (A) ANSWERS

Name: _____

Date: _____

Score: _____

Fill in the digits that have mysteriously disappeared.

1.
$$\begin{array}{r} 75 \\ + \boxed{5}\boxed{2}\boxed{9} \\ \hline 604 \end{array}$$



2.
$$\begin{array}{r} \boxed{1}53\boxed{6} \\ - 6\boxed{5}4 \\ \hline 882 \end{array}$$



3.
$$\begin{array}{r} \boxed{1}304 \\ - \boxed{4}07 \\ \hline 8\boxed{9}\boxed{7} \end{array}$$



4.
$$\begin{array}{r} \boxed{7}85 \\ - 6\boxed{8}\boxed{5} \\ \hline 100 \end{array}$$



5.
$$\begin{array}{r} 91 \\ + \boxed{2}\boxed{2}\boxed{2} \\ \hline 3\boxed{1}\boxed{3} \end{array}$$



6.
$$\begin{array}{r} 692 \\ - \boxed{4}\boxed{7}6 \\ \hline 21\boxed{6} \end{array}$$



7.
$$\begin{array}{r} 889 \\ + \boxed{1}\boxed{2}7 \\ \hline \boxed{1}0\boxed{1}\boxed{6} \end{array}$$



8.
$$\begin{array}{r} \boxed{1}\boxed{1}51 \\ - 6\boxed{6}4 \\ \hline 48\boxed{7} \end{array}$$



9.
$$\begin{array}{r} \boxed{2}54 \\ + 31\boxed{5} \\ \hline 5\boxed{6}9 \end{array}$$



10.
$$\begin{array}{r} 936 \\ + \boxed{7}5\boxed{4} \\ \hline \boxed{1}6\boxed{9}0 \end{array}$$



11.
$$\begin{array}{r} 82 \\ + \boxed{7}\boxed{4}5 \\ \hline 82\boxed{7} \end{array}$$



12.
$$\begin{array}{r} 54\boxed{7} \\ + 1\boxed{1}7 \\ \hline \boxed{6}64 \end{array}$$



13.
$$\begin{array}{r} 6\boxed{8}3 \\ + \boxed{3}1\boxed{3} \\ \hline 996 \end{array}$$



14.
$$\begin{array}{r} \boxed{6}88 \\ - 6\boxed{1}\boxed{2} \\ \hline 76 \end{array}$$



15.
$$\begin{array}{r} \boxed{1}3\boxed{8}5 \\ - 93\boxed{2} \\ \hline \boxed{4}53 \end{array}$$



16.
$$\begin{array}{r} 1\boxed{4}0 \\ + 468 \\ \hline \boxed{6}08 \end{array}$$



17.
$$\begin{array}{r} \boxed{1}\boxed{2}94 \\ - 610 \\ \hline 6\boxed{8}\boxed{4} \end{array}$$



18.
$$\begin{array}{r} 49\boxed{9} \\ - 357 \\ \hline \boxed{1}42 \end{array}$$



19.
$$\begin{array}{r} 8\boxed{4}7 \\ + \boxed{2}\boxed{2}\boxed{9} \\ \hline \boxed{1}076 \end{array}$$



20.
$$\begin{array}{r} 9\boxed{8}0 \\ - 35 \\ \hline \boxed{9}4\boxed{5} \end{array}$$



GHOSTLY FIGURES MISSING DIGITS ADDITION AND SUBTRACTION (B)

Name: _____

Date: _____

Score: _____

Fill in the digits that have mysteriously disappeared.

1.
$$\begin{array}{r} \square 6 5 \\ + 8 \square 2 \\ \hline \square 2 1 \square \end{array}$$



2.
$$\begin{array}{r} 7 \square \square \\ + \square 1 5 \\ \hline \square 6 3 7 \end{array}$$



3.
$$\begin{array}{r} \square \square \square 1 \\ - 6 9 \square \\ \hline 5 8 1 \end{array}$$



4.
$$\begin{array}{r} \square \square 3 6 \\ - 9 \square 3 \\ \hline 9 1 \square \end{array}$$



5.
$$\begin{array}{r} \square 6 1 \square \\ - 6 2 0 \\ \hline \square \square 6 \end{array}$$



6.
$$\begin{array}{r} \square 0 \square \square \\ - \square 9 0 \\ \hline 8 8 0 \end{array}$$



7.
$$\begin{array}{r} \square 4 9 0 \\ - \square \square 4 \\ \hline 5 4 \square \end{array}$$



8.
$$\begin{array}{r} 5 \square 6 \\ + \square 4 \square \\ \hline \square 2 1 0 \end{array}$$



9.
$$\begin{array}{r} 7 5 \square \\ + 8 1 0 \\ \hline \square \square \square 3 \end{array}$$



10.
$$\begin{array}{r} \square \square 2 \\ + 9 4 \square \\ \hline \square 3 2 6 \end{array}$$



11.
$$\begin{array}{r} 7 7 7 \\ + \square 8 \square \\ \hline \square 6 \square 9 \end{array}$$



12.
$$\begin{array}{r} \square \square \square \\ + 4 0 2 \\ \hline 5 3 6 \end{array}$$



13.
$$\begin{array}{r} 5 3 \square \\ + \square 1 7 \\ \hline \square 2 \square 3 \end{array}$$



14.
$$\begin{array}{r} 1 \square \\ + \square \square 0 \\ \hline 5 6 5 \end{array}$$



15.
$$\begin{array}{r} \square 5 6 \square \\ - \square 5 9 \\ \hline 9 \square 8 \end{array}$$



16.
$$\begin{array}{r} 5 \square 6 \\ - 2 0 \square \\ \hline \square 4 5 \end{array}$$



17.
$$\begin{array}{r} \square 0 \square 3 \\ - \square 5 \square \\ \hline 1 0 7 \end{array}$$



18.
$$\begin{array}{r} \square 0 7 \\ - 5 4 3 \\ \hline 2 \square \square \end{array}$$



19.
$$\begin{array}{r} 1 \square \square \\ + \square 2 0 \\ \hline 5 0 0 \end{array}$$



20.
$$\begin{array}{r} 5 3 2 \\ - \square 2 \square \\ \hline 1 \square 6 \end{array}$$



GHOSTLY FIGURES MISSING DIGITS ADDITION AND SUBTRACTION (B) ANSWERS

Name: _____

Date: _____

Score: _____

Fill in the digits that have mysteriously disappeared.

1.
$$\begin{array}{r} \boxed{3} \boxed{6} \boxed{5} \\ + \quad \boxed{8} \boxed{5} \boxed{2} \\ \hline \boxed{1} \boxed{2} \boxed{1} \boxed{7} \end{array}$$



2.
$$\begin{array}{r} \boxed{7} \boxed{2} \boxed{2} \\ + \quad \boxed{9} \boxed{1} \boxed{5} \\ \hline \boxed{1} \boxed{6} \boxed{3} \boxed{7} \end{array}$$



3.
$$\begin{array}{r} \boxed{1} \boxed{2} \boxed{7} \boxed{1} \\ - \quad \boxed{6} \boxed{9} \boxed{0} \\ \hline \quad \boxed{5} \boxed{8} \boxed{1} \end{array}$$



4.
$$\begin{array}{r} \boxed{1} \boxed{8} \boxed{3} \boxed{6} \\ - \quad \boxed{9} \boxed{2} \boxed{3} \\ \hline \quad \boxed{9} \boxed{1} \boxed{3} \end{array}$$



5.
$$\begin{array}{r} \boxed{1} \boxed{6} \boxed{1} \boxed{6} \\ - \quad \boxed{6} \boxed{2} \boxed{0} \\ \hline \quad \boxed{9} \boxed{9} \boxed{6} \end{array}$$



6.
$$\begin{array}{r} \boxed{1} \boxed{0} \boxed{7} \boxed{0} \\ - \quad \boxed{1} \boxed{9} \boxed{0} \\ \hline \quad \boxed{8} \boxed{8} \boxed{0} \end{array}$$



7.
$$\begin{array}{r} \boxed{1} \boxed{4} \boxed{9} \boxed{0} \\ - \quad \boxed{9} \boxed{4} \boxed{4} \\ \hline \quad \boxed{5} \boxed{4} \boxed{6} \end{array}$$



8.
$$\begin{array}{r} \quad \boxed{5} \boxed{6} \boxed{6} \\ + \quad \boxed{6} \boxed{4} \boxed{4} \\ \hline \boxed{1} \boxed{2} \boxed{1} \boxed{0} \end{array}$$



9.
$$\begin{array}{r} \quad \boxed{7} \boxed{5} \boxed{3} \\ + \quad \boxed{8} \boxed{1} \boxed{0} \\ \hline \boxed{1} \boxed{5} \boxed{6} \boxed{3} \end{array}$$



10.
$$\begin{array}{r} \boxed{3} \boxed{8} \boxed{2} \\ + \quad \boxed{9} \boxed{4} \boxed{4} \\ \hline \boxed{1} \boxed{3} \boxed{2} \boxed{6} \end{array}$$



11.
$$\begin{array}{r} \quad \boxed{7} \boxed{7} \boxed{7} \\ + \quad \boxed{8} \boxed{8} \boxed{2} \\ \hline \boxed{1} \boxed{6} \boxed{5} \boxed{9} \end{array}$$



12.
$$\begin{array}{r} \boxed{1} \boxed{3} \boxed{4} \\ + \quad \boxed{4} \boxed{0} \boxed{2} \\ \hline \quad \boxed{5} \boxed{3} \boxed{6} \end{array}$$



13.
$$\begin{array}{r} \quad \boxed{5} \boxed{3} \boxed{6} \\ + \quad \boxed{7} \boxed{1} \boxed{7} \\ \hline \boxed{1} \boxed{2} \boxed{5} \boxed{3} \end{array}$$



14.
$$\begin{array}{r} \quad \boxed{1} \boxed{5} \\ + \quad \boxed{5} \boxed{5} \boxed{0} \\ \hline \quad \boxed{5} \boxed{6} \boxed{5} \end{array}$$



15.
$$\begin{array}{r} \boxed{1} \boxed{5} \boxed{6} \boxed{7} \\ - \quad \boxed{6} \boxed{5} \boxed{9} \\ \hline \quad \boxed{9} \boxed{0} \boxed{8} \end{array}$$



16.
$$\begin{array}{r} \quad \boxed{5} \boxed{4} \boxed{6} \\ - \quad \boxed{2} \boxed{0} \boxed{1} \\ \hline \quad \boxed{3} \boxed{4} \boxed{5} \end{array}$$



17.
$$\begin{array}{r} \boxed{1} \boxed{0} \boxed{6} \boxed{3} \\ - \quad \boxed{9} \boxed{5} \boxed{6} \\ \hline \quad \boxed{1} \boxed{0} \boxed{7} \end{array}$$



18.
$$\begin{array}{r} \boxed{8} \boxed{0} \boxed{7} \\ - \quad \boxed{5} \boxed{4} \boxed{3} \\ \hline \quad \boxed{2} \boxed{6} \boxed{4} \end{array}$$



19.
$$\begin{array}{r} \quad \boxed{1} \boxed{8} \boxed{0} \\ + \quad \boxed{3} \boxed{2} \boxed{0} \\ \hline \quad \boxed{5} \boxed{0} \boxed{0} \end{array}$$



20.
$$\begin{array}{r} \quad \boxed{5} \boxed{3} \boxed{2} \\ - \quad \boxed{4} \boxed{2} \boxed{6} \\ \hline \quad \boxed{1} \boxed{0} \boxed{6} \end{array}$$



GHOSTLY FIGURES MISSING DIGITS ADDITION AND SUBTRACTION (C)


Name: _____

Date: _____

Score: _____

Fill in the digits that have mysteriously disappeared.

1.
$$\begin{array}{r} 474 \\ - \square 8 \square \\ \hline 2 \square 4 \end{array}$$



2.
$$\begin{array}{r} \square \square \square 9 \\ - 337 \\ \hline 95 \square \end{array}$$



3.
$$\begin{array}{r} 456 \\ + 5 \square \square \\ \hline \square 77 \end{array}$$



4.
$$\begin{array}{r} 746 \\ - \square 0 \square \\ \hline \square 2 \end{array}$$



5.
$$\begin{array}{r} \square \square 13 \\ - 5 \square \square \\ \hline 739 \end{array}$$



6.
$$\begin{array}{r} \square \square \square \\ + 373 \\ \hline \square 104 \end{array}$$



7.
$$\begin{array}{r} 45 \square \\ + 185 \\ \hline \square \square 8 \end{array}$$



8.
$$\begin{array}{r} \square 54 \square \\ - 760 \\ \hline \square \square 1 \end{array}$$



9.
$$\begin{array}{r} \square \square 9 \\ + 73 \square \\ \hline \square 298 \end{array}$$



10.
$$\begin{array}{r} 325 \\ + 9 \square \square \\ \hline \square \square 54 \end{array}$$



11.
$$\begin{array}{r} 9 \square 8 \\ - \square 1 \square \\ \hline 381 \end{array}$$



12.
$$\begin{array}{r} 756 \\ - 3 \square \square \\ \hline \square 42 \end{array}$$



13.
$$\begin{array}{r} 2 \square \square \\ + \square 14 \\ \hline 488 \end{array}$$



14.
$$\begin{array}{r} \square 9 \square \\ + 4 \square 6 \\ \hline \square 069 \end{array}$$



15.
$$\begin{array}{r} \square \square 20 \\ - 8 \square \square \\ \hline 285 \end{array}$$



16.
$$\begin{array}{r} \square 0 \\ + 37 \square \\ \hline \square 42 \end{array}$$



17.
$$\begin{array}{r} \square 47 \square \\ - 718 \\ \hline \square \square 4 \end{array}$$



18.
$$\begin{array}{r} 54 \square \\ + \square \square 1 \\ \hline 843 \end{array}$$



19.
$$\begin{array}{r} 88 \square \\ + 9 \square 8 \\ \hline \square \square 80 \end{array}$$



20.
$$\begin{array}{r} 444 \\ - \square 10 \\ \hline 3 \square \square \end{array}$$



GHOSTLY FIGURES MISSING DIGITS ADDITION AND SUBTRACTION (C) ANSWERS

Name: _____

Date: _____

Score: _____

Fill in the digits that have mysteriously disappeared.

1.
$$\begin{array}{r} 474 \\ - 180 \\ \hline 294 \end{array}$$



2.
$$\begin{array}{r} 1289 \\ - 337 \\ \hline 952 \end{array}$$



3.
$$\begin{array}{r} 456 \\ + 521 \\ \hline 977 \end{array}$$



4.
$$\begin{array}{r} 746 \\ - 704 \\ \hline 42 \end{array}$$



5.
$$\begin{array}{r} 1313 \\ - 574 \\ \hline 739 \end{array}$$



6.
$$\begin{array}{r} 731 \\ + 373 \\ \hline 1104 \end{array}$$



7.
$$\begin{array}{r} 453 \\ + 185 \\ \hline 638 \end{array}$$



8.
$$\begin{array}{r} 1541 \\ - 760 \\ \hline 781 \end{array}$$



9.
$$\begin{array}{r} 559 \\ + 739 \\ \hline 1298 \end{array}$$



10.
$$\begin{array}{r} 325 \\ + 929 \\ \hline 1254 \end{array}$$



11.
$$\begin{array}{r} 998 \\ - 617 \\ \hline 381 \end{array}$$



12.
$$\begin{array}{r} 756 \\ - 314 \\ \hline 442 \end{array}$$



13.
$$\begin{array}{r} 274 \\ + 214 \\ \hline 488 \end{array}$$



14.
$$\begin{array}{r} 593 \\ + 476 \\ \hline 1069 \end{array}$$



15.
$$\begin{array}{r} 1120 \\ - 835 \\ \hline 285 \end{array}$$



16.
$$\begin{array}{r} 70 \\ + 372 \\ \hline 442 \end{array}$$



17.
$$\begin{array}{r} 1472 \\ - 718 \\ \hline 754 \end{array}$$



18.
$$\begin{array}{r} 542 \\ + 301 \\ \hline 843 \end{array}$$



19.
$$\begin{array}{r} 882 \\ + 998 \\ \hline 1880 \end{array}$$



20.
$$\begin{array}{r} 444 \\ - 110 \\ \hline 334 \end{array}$$



GHOSTLY FIGURES MISSING DIGITS ADDITION AND SUBTRACTION (D)

Name: _____

Date: _____

Score: _____

Fill in the digits that have mysteriously disappeared.

1.
$$\begin{array}{r} \square\square98 \\ - 3\square\square \\ \hline 774 \end{array}$$



2.
$$\begin{array}{r} 80 \\ + 6\square\square \\ \hline \square18 \end{array}$$



3.
$$\begin{array}{r} 289 \\ + 25\square \\ \hline \square\square3 \end{array}$$



4.
$$\begin{array}{r} \square60 \\ - 6\square1 \\ \hline 20\square \end{array}$$



5.
$$\begin{array}{r} \square\square \\ + 924 \\ \hline \square\square21 \end{array}$$



6.
$$\begin{array}{r} \square\square\square \\ - 93 \\ \hline 787 \end{array}$$



7.
$$\begin{array}{r} 40\square \\ + 8\square4 \\ \hline \square\square65 \end{array}$$



8.
$$\begin{array}{r} \square\square\square\square \\ - 755 \\ \hline 665 \end{array}$$



9.
$$\begin{array}{r} \square85 \\ + 3\square7 \\ \hline 69\square \end{array}$$



10.
$$\begin{array}{r} 193 \\ + 24\square \\ \hline \square\square7 \end{array}$$



11.
$$\begin{array}{r} \square5\square7 \\ - \square64 \\ \hline 80\square \end{array}$$



12.
$$\begin{array}{r} \square35\square \\ - \square\square2 \\ \hline 629 \end{array}$$



13.
$$\begin{array}{r} 1\square\square \\ + 14 \\ \hline \square26 \end{array}$$



14.
$$\begin{array}{r} \square7\square \\ - 1\square4 \\ \hline 436 \end{array}$$



15.
$$\begin{array}{r} 1\square0 \\ + \square47 \\ \hline 55\square \end{array}$$



16.
$$\begin{array}{r} \square\square\square0 \\ - 515 \\ \hline 75\square \end{array}$$



17.
$$\begin{array}{r} 182 \\ + \square\square\square \\ \hline 524 \end{array}$$



18.
$$\begin{array}{r} 539 \\ + \square51 \\ \hline \square4\square\square \end{array}$$



19.
$$\begin{array}{r} \square8\square\square \\ - 924 \\ \hline \square95 \end{array}$$



20.
$$\begin{array}{r} \square95 \\ - 8\square6 \\ \hline 1\square \end{array}$$



GHOSTLY FIGURES MISSING DIGITS ADDITION AND SUBTRACTION (D) ANSWERS

Name: _____

Date: _____

Score: _____

Fill in the digits that have mysteriously disappeared.

1.
$$\begin{array}{r} \boxed{1}\boxed{0}98 \\ - 3\boxed{2}\boxed{4} \\ \hline 774 \end{array}$$



2.
$$\begin{array}{r} 80 \\ + 6\boxed{3}\boxed{8} \\ \hline \boxed{7}18 \end{array}$$



3.
$$\begin{array}{r} 289 \\ + 25\boxed{4} \\ \hline \boxed{5}\boxed{4}3 \end{array}$$



4.
$$\begin{array}{r} \boxed{8}60 \\ - 6\boxed{5}1 \\ \hline 20\boxed{9} \end{array}$$



5.
$$\begin{array}{r} \boxed{9}\boxed{7} \\ + 924 \\ \hline \boxed{1}\boxed{0}21 \end{array}$$



6.
$$\begin{array}{r} \boxed{8}\boxed{8}0 \\ - 93 \\ \hline 787 \end{array}$$



7.
$$\begin{array}{r} 40\boxed{1} \\ + 8\boxed{6}4 \\ \hline \boxed{1}\boxed{2}65 \end{array}$$



8.
$$\begin{array}{r} \boxed{1}\boxed{4}\boxed{2}0 \\ - 755 \\ \hline 665 \end{array}$$



9.
$$\begin{array}{r} \boxed{3}85 \\ + 3\boxed{0}7 \\ \hline 69\boxed{2} \end{array}$$



10.
$$\begin{array}{r} 193 \\ + 24\boxed{4} \\ \hline \boxed{4}\boxed{3}7 \end{array}$$



11.
$$\begin{array}{r} \boxed{1}5\boxed{6}7 \\ - \boxed{7}64 \\ \hline 80\boxed{3} \end{array}$$



12.
$$\begin{array}{r} \boxed{1}35\boxed{1} \\ - \boxed{7}22 \\ \hline 629 \end{array}$$



13.
$$\begin{array}{r} 1\boxed{1}\boxed{2} \\ + 14 \\ \hline \boxed{1}26 \end{array}$$



14.
$$\begin{array}{r} \boxed{5}7\boxed{0} \\ - 1\boxed{3}4 \\ \hline 436 \end{array}$$



15.
$$\begin{array}{r} 1\boxed{1}0 \\ + \boxed{4}47 \\ \hline 55\boxed{7} \end{array}$$



16.
$$\begin{array}{r} \boxed{1}\boxed{2}70 \\ - 515 \\ \hline 75\boxed{5} \end{array}$$



17.
$$\begin{array}{r} 182 \\ + \boxed{3}\boxed{4}\boxed{2} \\ \hline 524 \end{array}$$



18.
$$\begin{array}{r} 539 \\ + \boxed{9}51 \\ \hline \boxed{1}4\boxed{9}0 \end{array}$$



19.
$$\begin{array}{r} \boxed{1}8\boxed{1}9 \\ - 924 \\ \hline \boxed{8}95 \end{array}$$



20.
$$\begin{array}{r} \boxed{8}95 \\ - 8\boxed{7}6 \\ \hline 1\boxed{9} \end{array}$$



GHOSTLY FIGURES MISSING DIGITS ADDITION AND SUBTRACTION (E)

Name: _____

Date: _____

Score: _____

Fill in the digits that have mysteriously disappeared.

1.
$$\begin{array}{r} 9 \square \square \\ - \square 3 7 \\ \hline 2 4 3 \end{array}$$



2.
$$\begin{array}{r} 8 7 6 \\ + \square 3 \square \\ \hline \square 2 \square 6 \end{array}$$



3.
$$\begin{array}{r} \square 0 1 1 \\ - 4 7 8 \\ \hline \square \square \square \end{array}$$



4.
$$\begin{array}{r} \square 1 9 \square \\ - 9 \square 8 \\ \hline \square 6 7 \end{array}$$



5.
$$\begin{array}{r} \square \square 2 2 \\ - 6 9 5 \\ \hline 9 \square \square \end{array}$$



6.
$$\begin{array}{r} \square \square 1 \\ + 4 0 \\ \hline 3 7 \square \end{array}$$



7.
$$\begin{array}{r} \square 5 5 7 \\ - 7 5 \square \\ \hline \square \square 5 \end{array}$$



8.
$$\begin{array}{r} \square 0 7 \\ + 4 9 \square \\ \hline \square 0 \square 3 \end{array}$$



9.
$$\begin{array}{r} \square \square \square \\ + 1 8 5 \\ \hline 9 2 2 \end{array}$$



10.
$$\begin{array}{r} \square 2 7 2 \\ - \square 3 2 \\ \hline 5 \square \square \end{array}$$



11.
$$\begin{array}{r} 8 5 1 \\ - \square 8 9 \\ \hline 2 \square \square \end{array}$$



12.
$$\begin{array}{r} 4 \square \square \\ + \square 7 3 \\ \hline 6 4 1 \end{array}$$



13.
$$\begin{array}{r} 6 \square \square \\ - 4 1 3 \\ \hline \square 0 9 \end{array}$$



14.
$$\begin{array}{r} \square \square 5 8 \\ - 7 \square 8 \\ \hline 3 1 \square \end{array}$$



15.
$$\begin{array}{r} 5 0 5 \\ + \square \square \square \\ \hline 6 6 0 \end{array}$$



16.
$$\begin{array}{r} 2 \square \square \\ + 1 8 \\ \hline \square 5 9 \end{array}$$



17.
$$\begin{array}{r} 6 \square \square \\ + \square 9 1 \\ \hline \square 2 3 1 \end{array}$$



18.
$$\begin{array}{r} 9 8 4 \\ + 8 \square 0 \\ \hline \square \square 2 \square \end{array}$$



19.
$$\begin{array}{r} 2 \square 4 \\ + \square 4 \square \\ \hline 5 5 7 \end{array}$$



20.
$$\begin{array}{r} \square 1 3 \\ - 3 7 8 \\ \hline \square \square \end{array}$$



GHOSTLY FIGURES MISSING DIGITS ADDITION AND SUBTRACTION (E) ANSWERS

Name: _____

Date: _____

Score: _____

Fill in the digits that have mysteriously disappeared.

$$\begin{array}{r} 1. \quad 9 \boxed{8} \boxed{0} \\ - \quad \boxed{7} \boxed{3} \boxed{7} \\ \hline 2 \quad 4 \quad 3 \end{array}$$



$$\begin{array}{r} 2. \quad 8 \quad 7 \quad 6 \\ + \quad \boxed{3} \boxed{3} \boxed{0} \\ \hline \boxed{1} \boxed{2} \boxed{0} \boxed{6} \end{array}$$



$$\begin{array}{r} 3. \quad \boxed{1} \boxed{0} \boxed{1} \boxed{1} \\ - \quad 4 \quad 7 \quad 8 \\ \hline \boxed{5} \boxed{3} \boxed{3} \end{array}$$



$$\begin{array}{r} 4. \quad \boxed{1} \boxed{1} \boxed{9} \boxed{5} \\ - \quad 9 \quad \boxed{2} \quad 8 \\ \hline \boxed{2} \boxed{6} \quad 7 \end{array}$$



$$\begin{array}{r} 5. \quad \boxed{1} \boxed{6} \boxed{2} \boxed{2} \\ - \quad 6 \quad 9 \quad 5 \\ \hline 9 \quad \boxed{2} \boxed{7} \end{array}$$



$$\begin{array}{r} 6. \quad \boxed{3} \boxed{3} \boxed{1} \\ + \quad 4 \quad 0 \\ \hline 3 \quad 7 \quad \boxed{1} \end{array}$$



$$\begin{array}{r} 7. \quad \boxed{1} \boxed{5} \boxed{5} \boxed{7} \\ - \quad 7 \quad 5 \quad \boxed{2} \\ \hline \boxed{8} \boxed{0} \boxed{5} \end{array}$$



$$\begin{array}{r} 8. \quad \boxed{5} \boxed{0} \boxed{7} \\ + \quad 4 \quad 9 \quad \boxed{6} \\ \hline \boxed{1} \boxed{0} \boxed{0} \boxed{3} \end{array}$$



$$\begin{array}{r} 9. \quad \boxed{7} \boxed{3} \boxed{7} \\ + \quad 1 \quad 8 \quad 5 \\ \hline 9 \quad 2 \quad 2 \end{array}$$



$$\begin{array}{r} 10. \quad \boxed{1} \boxed{2} \boxed{7} \boxed{2} \\ - \quad \boxed{7} \boxed{3} \boxed{2} \\ \hline 5 \quad \boxed{4} \boxed{0} \end{array}$$



$$\begin{array}{r} 11. \quad 8 \quad 5 \quad 1 \\ - \quad \boxed{5} \boxed{8} \quad 9 \\ \hline 2 \quad \boxed{6} \boxed{2} \end{array}$$



$$\begin{array}{r} 12. \quad 4 \quad \boxed{6} \boxed{8} \\ + \quad \boxed{1} \boxed{7} \quad 3 \\ \hline 6 \quad 4 \quad 1 \end{array}$$



$$\begin{array}{r} 13. \quad 6 \quad \boxed{2} \boxed{2} \\ - \quad 4 \quad 1 \quad 3 \\ \hline \boxed{2} \quad 0 \quad 9 \end{array}$$



$$\begin{array}{r} 14. \quad \boxed{1} \boxed{0} \boxed{5} \quad 8 \\ - \quad 7 \quad \boxed{4} \quad 8 \\ \hline 3 \quad 1 \quad \boxed{0} \end{array}$$



$$\begin{array}{r} 15. \quad 5 \quad 0 \quad 5 \\ + \quad \boxed{1} \boxed{5} \boxed{5} \\ \hline 6 \quad 6 \quad 0 \end{array}$$



$$\begin{array}{r} 16. \quad 2 \quad \boxed{4} \boxed{1} \\ + \quad 1 \quad 8 \\ \hline \boxed{2} \quad 5 \quad 9 \end{array}$$



$$\begin{array}{r} 17. \quad 6 \quad \boxed{4} \boxed{0} \\ + \quad \boxed{5} \quad 9 \quad 1 \\ \hline \boxed{1} \quad 2 \quad 3 \quad 1 \end{array}$$



$$\begin{array}{r} 18. \quad 9 \quad 8 \quad 4 \\ + \quad 8 \quad \boxed{4} \quad 0 \\ \hline \boxed{1} \quad \boxed{8} \quad 2 \quad 4 \end{array}$$



$$\begin{array}{r} 19. \quad 2 \quad \boxed{1} \quad 4 \\ + \quad \boxed{3} \quad \boxed{4} \quad \boxed{3} \\ \hline 5 \quad 5 \quad 7 \end{array}$$



$$\begin{array}{r} 20. \quad \boxed{4} \quad 1 \quad 3 \\ - \quad 3 \quad 7 \quad 8 \\ \hline \boxed{3} \quad \boxed{5} \end{array}$$



GHOSTLY FIGURES MISSING DIGITS ADDITION AND SUBTRACTION (F)

Name: _____

Date: _____

Score: _____

Fill in the digits that have mysteriously disappeared.

1.
$$\begin{array}{r} 81\Box \\ + \Box 88 \\ \hline \Box 0\Box 7 \end{array}$$



2.
$$\begin{array}{r} \Box 0 \\ + 33\Box \\ \hline \Box 93 \end{array}$$



3.
$$\begin{array}{r} \Box 7 \\ + \Box 38 \\ \hline 26\Box \end{array}$$



4.
$$\begin{array}{r} 272 \\ + \Box 8\Box \\ \hline 4\Box 7 \end{array}$$



5.
$$\begin{array}{r} 11\Box \\ + 1\Box 8 \\ \hline \Box 35 \end{array}$$



6.
$$\begin{array}{r} 8\Box 5 \\ - 290 \\ \hline \Box 7\Box \end{array}$$



7.
$$\begin{array}{r} 37\Box \\ - \Box 05 \\ \hline \Box 8 \end{array}$$



8.
$$\begin{array}{r} 8\Box 4 \\ - \Box 79 \\ \hline 26\Box \end{array}$$



9.
$$\begin{array}{r} 901 \\ + \Box\Box 0 \\ \hline \Box 44\Box \end{array}$$



10.
$$\begin{array}{r} 25 \\ + \Box 77 \\ \hline \Box 0\Box\Box \end{array}$$



11.
$$\begin{array}{r} \Box\Box 7 \\ - 79 \\ \hline 88\Box \end{array}$$



12.
$$\begin{array}{r} \Box 85 \\ - 762 \\ \hline \Box\Box \end{array}$$



13.
$$\begin{array}{r} \Box\Box 3 \\ + 59\Box \\ \hline 753 \end{array}$$



14.
$$\begin{array}{r} \Box\Box\Box 1 \\ - 94\Box \\ \hline 645 \end{array}$$



15.
$$\begin{array}{r} \Box\Box 3\Box \\ - 4\Box 7 \\ \hline 814 \end{array}$$



16.
$$\begin{array}{r} \Box 640 \\ - 654 \\ \hline \Box\Box\Box \end{array}$$



17.
$$\begin{array}{r} 2\Box 2 \\ + 20\Box \\ \hline \Box 78 \end{array}$$



18.
$$\begin{array}{r} 8\Box 6 \\ + \Box 6\Box \\ \hline \Box 647 \end{array}$$



19.
$$\begin{array}{r} 518 \\ - \Box 43 \\ \hline 2\Box\Box \end{array}$$



20.
$$\begin{array}{r} \Box\Box 3 \\ - 19\Box \\ \hline 90 \end{array}$$



GHOSTLY FIGURES MISSING DIGITS ADDITION AND SUBTRACTION (F) ANSWERS

Name: _____

Date: _____

Score: _____

Fill in the digits that have mysteriously disappeared.

$$\begin{array}{r} 1. \quad 81\boxed{9} \\ + \quad \boxed{1}88 \\ \hline \boxed{1}007 \end{array}$$



$$\begin{array}{r} 2. \quad \boxed{6}0 \\ + \quad 33\boxed{3} \\ \hline \boxed{3}93 \end{array}$$



$$\begin{array}{r} 3. \quad \boxed{2}7 \\ + \quad \boxed{2}38 \\ \hline 26\boxed{5} \end{array}$$



$$\begin{array}{r} 4. \quad 272 \\ + \quad \boxed{1}8\boxed{5} \\ \hline 4\boxed{5}7 \end{array}$$



$$\begin{array}{r} 5. \quad 11\boxed{7} \\ + \quad 1\boxed{1}8 \\ \hline \boxed{2}35 \end{array}$$



$$\begin{array}{r} 6. \quad 8\boxed{6}5 \\ - \quad 290 \\ \hline \boxed{5}7\boxed{5} \end{array}$$



$$\begin{array}{r} 7. \quad 37\boxed{3} \\ - \quad \boxed{3}05 \\ \hline \boxed{6}8 \end{array}$$



$$\begin{array}{r} 8. \quad 8\boxed{4}4 \\ - \quad \boxed{5}79 \\ \hline 26\boxed{5} \end{array}$$



$$\begin{array}{r} 9. \quad 901 \\ + \quad \boxed{5}\boxed{4}0 \\ \hline \boxed{1}44\boxed{1} \end{array}$$



$$\begin{array}{r} 10. \quad 25 \\ + \quad \boxed{9}77 \\ \hline \boxed{1}00\boxed{2} \end{array}$$



$$\begin{array}{r} 11. \quad \boxed{9}\boxed{6}7 \\ - \quad 79 \\ \hline 88\boxed{8} \end{array}$$



$$\begin{array}{r} 12. \quad \boxed{7}85 \\ - \quad 762 \\ \hline \boxed{2}\boxed{3} \end{array}$$



$$\begin{array}{r} 13. \quad \boxed{1}\boxed{6}3 \\ + \quad 59\boxed{0} \\ \hline 753 \end{array}$$



$$\begin{array}{r} 14. \quad \boxed{1}\boxed{5}\boxed{9}1 \\ - \quad 94\boxed{6} \\ \hline 645 \end{array}$$



$$\begin{array}{r} 15. \quad \boxed{1}\boxed{2}\boxed{3}\boxed{1} \\ - \quad 4\boxed{1}7 \\ \hline 814 \end{array}$$



$$\begin{array}{r} 16. \quad \boxed{1}640 \\ - \quad 654 \\ \hline \boxed{9}\boxed{8}\boxed{6} \end{array}$$



$$\begin{array}{r} 17. \quad 2\boxed{7}2 \\ + \quad 20\boxed{6} \\ \hline \boxed{4}78 \end{array}$$



$$\begin{array}{r} 18. \quad 8\boxed{8}6 \\ + \quad \boxed{7}6\boxed{1} \\ \hline \boxed{1}647 \end{array}$$



$$\begin{array}{r} 19. \quad 518 \\ - \quad \boxed{2}43 \\ \hline 2\boxed{7}5 \end{array}$$



$$\begin{array}{r} 20. \quad \boxed{2}\boxed{8}3 \\ - \quad 19\boxed{3} \\ \hline 90 \end{array}$$



GHOSTLY FIGURES MISSING DIGITS ADDITION AND SUBTRACTION (C)

Name: _____

Date: _____

Score: _____

Fill in the digits that have mysteriously disappeared.

1.
$$\begin{array}{r} \square 221 \\ - 274 \\ \hline \square\square\square \end{array}$$




2.
$$\begin{array}{r} \square 0\square\square \\ - \square 70 \\ \hline 544 \end{array}$$



3.
$$\begin{array}{r} \square 07\square \\ - 8\square 7 \\ \hline \square 26 \end{array}$$



4.
$$\begin{array}{r} 54\square \\ + \square\square 8 \\ \hline \square 305 \end{array}$$



5.
$$\begin{array}{r} 598 \\ - 453 \\ \hline \square\square\square \end{array}$$



6.
$$\begin{array}{r} \square 6\square \\ - 2\square 7 \\ \hline 87 \end{array}$$



7.
$$\begin{array}{r} \square 404 \\ - 844 \\ \hline \square\square\square \end{array}$$



8.
$$\begin{array}{r} \square 0\square \\ + 1\square 7 \\ \hline 697 \end{array}$$



9.
$$\begin{array}{r} 663 \\ + 6\square 3 \\ \hline \square\square 5\square \end{array}$$



10.
$$\begin{array}{r} \square 301 \\ - 96\square \\ \hline \square\square 0 \end{array}$$



11.
$$\begin{array}{r} \square 0 \\ + \square 18 \\ \hline 54\square \end{array}$$



12.
$$\begin{array}{r} \square 038 \\ - 39\square \\ \hline \square\square 7 \end{array}$$



13.
$$\begin{array}{r} 5\square\square \\ + \square 41 \\ \hline 703 \end{array}$$



14.
$$\begin{array}{r} 5\square 9 \\ + \square 71 \\ \hline 70\square \end{array}$$



15.
$$\begin{array}{r} 194 \\ + 86 \\ \hline \square\square\square \end{array}$$



16.
$$\begin{array}{r} \square 42 \\ + 94\square \\ \hline \square 7\square 0 \end{array}$$



17.
$$\begin{array}{r} 866 \\ - 4\square\square \\ \hline \square 32 \end{array}$$



18.
$$\begin{array}{r} \square 95 \\ - 52\square \\ \hline \square 5 \end{array}$$



19.
$$\begin{array}{r} \square 2 \\ + 806 \\ \hline \square 7\square \end{array}$$



20.
$$\begin{array}{r} 476 \\ + 6\square 0 \\ \hline \square\square 2\square \end{array}$$



GHOSTLY FIGURES MISSING DIGITS ADDITION AND SUBTRACTION (Q) ANSWERS

Name: _____

Date: _____

Score: _____

Fill in the digits that have mysteriously disappeared.

$$\begin{array}{r} 1. \quad \boxed{1}221 \\ - \quad 274 \\ \hline \boxed{9}\boxed{4}\boxed{7} \end{array}$$



$$\begin{array}{r} 2. \quad \boxed{1}0\boxed{1}4 \\ - \quad \boxed{4}70 \\ \hline 544 \end{array}$$



$$\begin{array}{r} 3. \quad \boxed{1}07\boxed{3} \\ - \quad 847 \\ \hline \boxed{2}26 \end{array}$$



$$\begin{array}{r} 4. \quad 54\boxed{7} \\ + \quad \boxed{7}\boxed{5}8 \\ \hline \boxed{1}305 \end{array}$$



$$\begin{array}{r} 5. \quad 598 \\ - \quad 453 \\ \hline \boxed{1}\boxed{4}\boxed{5} \end{array}$$



$$\begin{array}{r} 6. \quad \boxed{3}6\boxed{4} \\ - \quad 2\boxed{7}7 \\ \hline 87 \end{array}$$



$$\begin{array}{r} 7. \quad \boxed{1}404 \\ - \quad 844 \\ \hline \boxed{5}\boxed{6}0 \end{array}$$



$$\begin{array}{r} 8. \quad \boxed{5}00 \\ + \quad 1\boxed{9}7 \\ \hline 697 \end{array}$$



$$\begin{array}{r} 9. \quad 663 \\ + \quad 6\boxed{9}3 \\ \hline \boxed{1}\boxed{3}\boxed{5}\boxed{6} \end{array}$$



$$\begin{array}{r} 10. \quad \boxed{1}301 \\ - \quad 96\boxed{1} \\ \hline \boxed{3}\boxed{4}0 \end{array}$$



$$\begin{array}{r} 11. \quad \boxed{3}0 \\ + \quad \boxed{5}18 \\ \hline 54\boxed{8} \end{array}$$



$$\begin{array}{r} 12. \quad \boxed{1}038 \\ - \quad 39\boxed{1} \\ \hline \boxed{6}\boxed{4}7 \end{array}$$



$$\begin{array}{r} 13. \quad 5\boxed{6}\boxed{2} \\ + \quad \boxed{1}41 \\ \hline 703 \end{array}$$



$$\begin{array}{r} 14. \quad 5\boxed{2}9 \\ + \quad \boxed{1}71 \\ \hline 70\boxed{0} \end{array}$$




$$\begin{array}{r} 15. \quad 194 \\ + \quad 86 \\ \hline \boxed{2}8\boxed{0} \end{array}$$



$$\begin{array}{r} 16. \quad \boxed{8}42 \\ + \quad 94\boxed{8} \\ \hline \boxed{1}790 \end{array}$$



$$\begin{array}{r} 17. \quad 866 \\ - \quad 4\boxed{3}\boxed{4} \\ \hline \boxed{4}32 \end{array}$$



$$\begin{array}{r} 18. \quad \boxed{5}95 \\ - \quad 52\boxed{0} \\ \hline \boxed{7}5 \end{array}$$



$$\begin{array}{r} 19. \quad \boxed{7}2 \\ + \quad 806 \\ \hline \boxed{8}7\boxed{8} \end{array}$$



$$\begin{array}{r} 20. \quad 476 \\ + \quad 6\boxed{5}0 \\ \hline \boxed{1}126 \end{array}$$



GHOSTLY FIGURES MISSING DIGITS ADDITION AND SUBTRACTION (H)

Name: _____

Date: _____

Score: _____

Fill in the digits that have mysteriously disappeared.

1.
$$\begin{array}{r} 6 \square 4 \\ + 533 \\ \hline \square \square 8 \square \end{array}$$



2.
$$\begin{array}{r} \square 76 \\ - 2 \square \square \\ \hline 302 \end{array}$$



3.
$$\begin{array}{r} \square 53 \\ - 595 \\ \hline 1 \square \square \end{array}$$



4.
$$\begin{array}{r} 828 \\ - \square 4 \\ \hline \square 1 \square \end{array}$$



5.
$$\begin{array}{r} \square 1 \square \\ - 4 \square 9 \\ \hline 210 \end{array}$$



6.
$$\begin{array}{r} \square 47 \square \\ - \square \square 6 \\ \hline 766 \end{array}$$



7.
$$\begin{array}{r} \square 63 \\ + 33 \square \\ \hline 5 \square 9 \end{array}$$



8.
$$\begin{array}{r} 949 \\ + 1 \square \square \\ \hline \square \square 43 \end{array}$$



9.
$$\begin{array}{r} \square 00 \square \\ - 801 \\ \hline \square \square 8 \end{array}$$



10.
$$\begin{array}{r} 541 \\ + 30 \\ \hline \square \square \square \end{array}$$



11.
$$\begin{array}{r} \square 0 \square 1 \\ - \square 14 \\ \hline 56 \square \end{array}$$



12.
$$\begin{array}{r} 4 \square 2 \\ + \square 3 \square \\ \hline 965 \end{array}$$



13.
$$\begin{array}{r} 721 \\ + 2 \square \square \\ \hline \square 51 \end{array}$$



14.
$$\begin{array}{r} \square \square 0 \\ + 529 \\ \hline 69 \square \end{array}$$



15.
$$\begin{array}{r} \square \square 49 \\ - 67 \square \\ \hline 9 \square 8 \end{array}$$



16.
$$\begin{array}{r} \square 0 \square 4 \\ - 51 \square \\ \hline \square 02 \end{array}$$



17.
$$\begin{array}{r} \square 64 \\ - \square \square \\ \hline 511 \end{array}$$



18.
$$\begin{array}{r} \square \square \\ + 78 \\ \hline \square 73 \end{array}$$



19.
$$\begin{array}{r} 2 \square \\ + \square 57 \\ \hline 4 \square 3 \end{array}$$



20.
$$\begin{array}{r} \square 44 \\ + 7 \square 9 \\ \hline \square 66 \square \end{array}$$



GHOSTLY FIGURES MISSING DIGITS ADDITION AND SUBTRACTION (H) ANSWERS

Name: _____

Date: _____

Score: _____

Fill in the digits that have mysteriously disappeared.

$$\begin{array}{r} 1. \quad 6 \boxed{5} 4 \\ + \quad 5 3 3 \\ \hline \boxed{1} \boxed{1} 8 \boxed{7} \end{array}$$



$$\begin{array}{r} 2. \quad \boxed{5} 7 6 \\ - \quad 2 \boxed{7} \boxed{4} \\ \hline 3 0 2 \end{array}$$



$$\begin{array}{r} 3. \quad \boxed{7} 5 3 \\ - \quad 5 9 5 \\ \hline \boxed{1} \boxed{5} \boxed{8} \end{array}$$



$$\begin{array}{r} 4. \quad 8 2 8 \\ - \quad \boxed{1} 4 \\ \hline \boxed{8} \boxed{1} \boxed{4} \end{array}$$



$$\begin{array}{r} 5. \quad \boxed{6} \boxed{1} \boxed{9} \\ - \quad 4 \boxed{0} 9 \\ \hline 2 1 0 \end{array}$$



$$\begin{array}{r} 6. \quad \boxed{1} 4 7 \boxed{2} \\ - \quad \boxed{7} \boxed{0} 6 \\ \hline 7 6 6 \end{array}$$



$$\begin{array}{r} 7. \quad \boxed{2} 6 3 \\ + \quad 3 3 \boxed{6} \\ \hline 5 \boxed{9} 9 \end{array}$$



$$\begin{array}{r} 8. \quad 9 4 9 \\ + \quad 1 \boxed{9} \boxed{4} \\ \hline \boxed{1} \boxed{1} 4 3 \end{array}$$



$$\begin{array}{r} 9. \quad \boxed{1} 0 0 \boxed{9} \\ - \quad 8 0 1 \\ \hline \boxed{2} \boxed{0} 8 \end{array}$$



$$\begin{array}{r} 10. \quad 5 4 1 \\ + \quad 3 0 \\ \hline \boxed{5} \boxed{7} \boxed{1} \end{array}$$



$$\begin{array}{r} 11. \quad \boxed{1} 0 \boxed{8} 1 \\ - \quad \boxed{5} 1 4 \\ \hline 5 6 \boxed{7} \end{array}$$



$$\begin{array}{r} 12. \quad 4 \boxed{3} 2 \\ + \quad \boxed{5} \boxed{3} \boxed{3} \\ \hline 9 6 5 \end{array}$$



$$\begin{array}{r} 13. \quad 7 2 1 \\ + \quad 2 \boxed{3} \boxed{0} \\ \hline \boxed{9} 5 1 \end{array}$$



$$\begin{array}{r} 14. \quad \boxed{1} \boxed{7} 0 \\ + \quad 5 2 9 \\ \hline 6 9 \boxed{9} \end{array}$$



$$\begin{array}{r} 15. \quad \boxed{1} \boxed{6} 4 9 \\ - \quad 6 7 \boxed{1} \\ \hline 9 \boxed{7} 8 \end{array}$$



$$\begin{array}{r} 16. \quad \boxed{1} 0 \boxed{1} 4 \\ - \quad 5 1 \boxed{2} \\ \hline \boxed{5} 0 2 \end{array}$$



$$\begin{array}{r} 17. \quad \boxed{5} 6 4 \\ - \quad \boxed{5} \boxed{3} \\ \hline 5 1 1 \end{array}$$



$$\begin{array}{r} 18. \quad \quad \boxed{9} \boxed{5} \\ + \quad 7 8 \\ \hline \boxed{1} 7 3 \end{array}$$



$$\begin{array}{r} 19. \quad \quad 2 \boxed{6} \\ + \quad \boxed{4} 5 7 \\ \hline 4 \boxed{8} 3 \end{array}$$



$$\begin{array}{r} 20. \quad \boxed{9} 4 4 \\ + \quad 7 \boxed{1} 9 \\ \hline \boxed{1} 6 6 \boxed{3} \end{array}$$



GHOSTLY FIGURES MISSING DIGITS ADDITION AND SUBTRACTION (1)

Name: _____

Date: _____

Score: _____

Fill in the digits that have mysteriously disappeared.

1.
$$\begin{array}{r} \square\square91 \\ - 98\square \\ \hline 9\square7 \end{array}$$



2.
$$\begin{array}{r} \square5\square \\ + \square6 \\ \hline 252 \end{array}$$



3.
$$\begin{array}{r} 4\square5 \\ + \square0\square \\ \hline 780 \end{array}$$



4.
$$\begin{array}{r} 4\square1 \\ + \square7\square \\ \hline 792 \end{array}$$



5.
$$\begin{array}{r} 83 \\ + \square\square\square \\ \hline 482 \end{array}$$



6.
$$\begin{array}{r} 223 \\ + 84\square \\ \hline \square\square\square8 \end{array}$$



7.
$$\begin{array}{r} 921 \\ - 804 \\ \hline \square\square\square \end{array}$$



8.
$$\begin{array}{r} \square\square\square \\ - 100 \\ \hline 597 \end{array}$$



9.
$$\begin{array}{r} \square\square87 \\ - 9\square\square \\ \hline 867 \end{array}$$



10.
$$\begin{array}{r} \square180 \\ - 8\square\square \\ \hline \square43 \end{array}$$



11.
$$\begin{array}{r} \square8 \\ + 401 \\ \hline \square7\square \end{array}$$



12.
$$\begin{array}{r} 25\square \\ + \square78 \\ \hline 5\square2 \end{array}$$



13.
$$\begin{array}{r} \square\square8\square \\ - 9\square4 \\ \hline 827 \end{array}$$



14.
$$\begin{array}{r} 585 \\ + 5\square\square \\ \hline \square\square70 \end{array}$$



15.
$$\begin{array}{r} \square1\square6 \\ - 869 \\ \hline \square1\square \end{array}$$



16.
$$\begin{array}{r} \square\square7\square \\ - 9\square0 \\ \hline 795 \end{array}$$



17.
$$\begin{array}{r} \square56 \\ - 4\square\square \\ \hline 19 \end{array}$$



18.
$$\begin{array}{r} 303 \\ + 692 \\ \hline \square\square\square \end{array}$$



19.
$$\begin{array}{r} 92 \\ + \square3\square \\ \hline \square0\square4 \end{array}$$



20.
$$\begin{array}{r} 726 \\ - \square1 \\ \hline \square6\square \end{array}$$



GHOSTLY FIGURES MISSING DIGITS ADDITION AND SUBTRACTION (1) ANSWERS

Name: _____

Date: _____

Score: _____

Fill in the digits that have mysteriously disappeared.

1.
$$\begin{array}{r} \boxed{1} \boxed{8} 9 1 \\ - 9 8 \boxed{4} \\ \hline 9 \boxed{0} 7 \end{array}$$



2.
$$\begin{array}{r} \boxed{1} \boxed{5} \boxed{6} \\ + \boxed{9} \boxed{6} \\ \hline 2 5 2 \end{array}$$



3.
$$\begin{array}{r} 4 \boxed{7} 5 \\ + \boxed{3} \boxed{0} \boxed{5} \\ \hline 7 8 0 \end{array}$$



4.
$$\begin{array}{r} 4 \boxed{2} 1 \\ + \boxed{3} \boxed{7} \boxed{1} \\ \hline 7 9 2 \end{array}$$



5.
$$\begin{array}{r} 8 3 \\ + \boxed{3} \boxed{9} \boxed{9} \\ \hline 4 8 2 \end{array}$$



6.
$$\begin{array}{r} 2 2 3 \\ + 8 4 \boxed{5} \\ \hline \boxed{1} \boxed{0} \boxed{6} 8 \end{array}$$



7.
$$\begin{array}{r} 9 2 1 \\ - 8 0 4 \\ \hline \boxed{1} \boxed{1} \boxed{7} \end{array}$$



8.
$$\begin{array}{r} \boxed{6} \boxed{9} \boxed{7} \\ - 1 0 0 \\ \hline 5 9 7 \end{array}$$



9.
$$\begin{array}{r} \boxed{1} \boxed{7} 8 7 \\ - 9 \boxed{2} \boxed{0} \\ \hline 8 6 7 \end{array}$$



10.
$$\begin{array}{r} \boxed{1} 1 8 0 \\ - 8 \boxed{3} \boxed{7} \\ \hline \boxed{3} 4 3 \end{array}$$



11.
$$\begin{array}{r} \boxed{7} 8 \\ + 4 0 1 \\ \hline \boxed{4} \boxed{7} \boxed{9} \end{array}$$



12.
$$\begin{array}{r} 2 5 \boxed{4} \\ + \boxed{2} \boxed{7} 8 \\ \hline 5 \boxed{3} 2 \end{array}$$



13.
$$\begin{array}{r} \boxed{1} \boxed{7} 8 \boxed{1} \\ - 9 \boxed{5} 4 \\ \hline 8 2 7 \end{array}$$



14.
$$\begin{array}{r} 5 8 5 \\ + 5 \boxed{8} \boxed{5} \\ \hline \boxed{1} \boxed{1} 7 0 \end{array}$$



15.
$$\begin{array}{r} \boxed{1} 1 \boxed{8} 6 \\ - 8 6 9 \\ \hline \boxed{3} 1 \boxed{7} \end{array}$$



16.
$$\begin{array}{r} \boxed{1} \boxed{7} 7 \boxed{5} \\ - 9 \boxed{8} 0 \\ \hline 7 9 5 \end{array}$$



17.
$$\begin{array}{r} \boxed{4} 5 6 \\ - 4 \boxed{3} \boxed{7} \\ \hline 1 9 \end{array}$$



18.
$$\begin{array}{r} 3 0 3 \\ + 6 9 2 \\ \hline \boxed{9} \boxed{9} \boxed{5} \end{array}$$



19.
$$\begin{array}{r} 9 2 \\ + \boxed{9} \boxed{3} \boxed{2} \\ \hline \boxed{1} 0 \boxed{2} 4 \end{array}$$



20.
$$\begin{array}{r} 7 2 6 \\ - \boxed{6} 1 \\ \hline \boxed{6} \boxed{6} \boxed{5} \end{array}$$



GHOSTLY FIGURES MISSING DIGITS ADDITION AND SUBTRACTION (J)

Name: _____

Date: _____

Score: _____

Fill in the digits that have mysteriously disappeared.

1.
$$\begin{array}{r} 3 \square \square \\ + \square 9 3 \\ \hline \square 3 2 8 \end{array}$$



2.
$$\begin{array}{r} \square 2 \square \\ + 1 \square 4 \\ \hline 5 9 3 \end{array}$$



3.
$$\begin{array}{r} \square 7 \square \\ - 2 \square 6 \\ \hline 1 8 \end{array}$$



4.
$$\begin{array}{r} 6 \square \\ + 8 0 2 \\ \hline \square \square 5 \end{array}$$



5.
$$\begin{array}{r} \square 6 2 \\ + 3 \square \square \\ \hline \square 1 1 8 \end{array}$$



6.
$$\begin{array}{r} \square 1 2 6 \\ - 8 \square \square \\ \hline \square 9 8 \end{array}$$



7.
$$\begin{array}{r} 2 7 0 \\ + 3 1 8 \\ \hline \square \square \square \end{array}$$



8.
$$\begin{array}{r} 8 3 \square \\ - 3 2 5 \\ \hline \square \square 4 \end{array}$$



9.
$$\begin{array}{r} \square 8 \square \square \\ - \square 7 1 \\ \hline 9 9 2 \end{array}$$



10.
$$\begin{array}{r} 8 \square 1 \\ + 6 4 4 \\ \hline \square \square 3 \square \end{array}$$



11.
$$\begin{array}{r} \square 0 7 \\ - 4 \square 9 \\ \hline 2 8 \square \end{array}$$



12.
$$\begin{array}{r} \square 6 \square \\ + 2 0 6 \\ \hline 4 \square 9 \end{array}$$



13.
$$\begin{array}{r} \square \square \square 5 \\ - 8 5 0 \\ \hline 4 5 \square \end{array}$$



14.
$$\begin{array}{r} 8 8 3 \\ - 1 6 \square \\ \hline \square \square 9 \end{array}$$



15.
$$\begin{array}{r} 1 \square \square \\ + \square 8 6 \\ \hline 5 0 5 \end{array}$$



16.
$$\begin{array}{r} 9 3 \square \\ + 9 5 0 \\ \hline \square \square \square 3 \end{array}$$



17.
$$\begin{array}{r} \square \square 0 \\ + 9 1 \square \\ \hline \square 3 7 7 \end{array}$$



18.
$$\begin{array}{r} \square 2 4 \\ - 1 4 6 \\ \hline 2 \square \square \end{array}$$



19.
$$\begin{array}{r} 6 9 9 \\ - \square \square 0 \\ \hline 3 \square \end{array}$$



20.
$$\begin{array}{r} \square 0 1 4 \\ - 4 2 \square \\ \hline \square \square 2 \end{array}$$



GHOSTLY FIGURES MISSING DIGITS ADDITION AND SUBTRACTION (J) ANSWERS

Name: _____

Date: _____

Score: _____

Fill in the digits that have mysteriously disappeared.

$$\begin{array}{r} 1. \quad \begin{array}{r} 335 \\ + 993 \\ \hline 1328 \end{array} \end{array}$$



$$\begin{array}{r} 2. \quad \begin{array}{r} 429 \\ + 164 \\ \hline 593 \end{array} \end{array}$$



$$\begin{array}{r} 3. \quad \begin{array}{r} 274 \\ - 256 \\ \hline 18 \end{array} \end{array}$$



$$\begin{array}{r} 4. \quad \begin{array}{r} 63 \\ + 802 \\ \hline 865 \end{array} \end{array}$$



$$\begin{array}{r} 5. \quad \begin{array}{r} 762 \\ + 356 \\ \hline 1118 \end{array} \end{array}$$



$$\begin{array}{r} 6. \quad \begin{array}{r} 1126 \\ - 828 \\ \hline 298 \end{array} \end{array}$$



$$\begin{array}{r} 7. \quad \begin{array}{r} 270 \\ + 318 \\ \hline 588 \end{array} \end{array}$$



$$\begin{array}{r} 8. \quad \begin{array}{r} 839 \\ - 325 \\ \hline 514 \end{array} \end{array}$$



$$\begin{array}{r} 9. \quad \begin{array}{r} 1863 \\ - 871 \\ \hline 992 \end{array} \end{array}$$



$$\begin{array}{r} 10. \quad \begin{array}{r} 891 \\ + 644 \\ \hline 1535 \end{array} \end{array}$$



$$\begin{array}{r} 11. \quad \begin{array}{r} 707 \\ - 419 \\ \hline 288 \end{array} \end{array}$$



$$\begin{array}{r} 12. \quad \begin{array}{r} 263 \\ + 206 \\ \hline 469 \end{array} \end{array}$$



$$\begin{array}{r} 13. \quad \begin{array}{r} 1305 \\ - 850 \\ \hline 455 \end{array} \end{array}$$



$$\begin{array}{r} 14. \quad \begin{array}{r} 883 \\ - 164 \\ \hline 719 \end{array} \end{array}$$




$$\begin{array}{r} 15. \quad \begin{array}{r} 119 \\ + 386 \\ \hline 505 \end{array} \end{array}$$



$$\begin{array}{r} 16. \quad \begin{array}{r} 933 \\ + 950 \\ \hline 1883 \end{array} \end{array}$$



$$\begin{array}{r} 17. \quad \begin{array}{r} 460 \\ + 917 \\ \hline 1377 \end{array} \end{array}$$



$$\begin{array}{r} 18. \quad \begin{array}{r} 424 \\ - 146 \\ \hline 278 \end{array} \end{array}$$



$$\begin{array}{r} 19. \quad \begin{array}{r} 699 \\ - 660 \\ \hline 39 \end{array} \end{array}$$



$$\begin{array}{r} 20. \quad \begin{array}{r} 1014 \\ - 422 \\ \hline 592 \end{array} \end{array}$$

