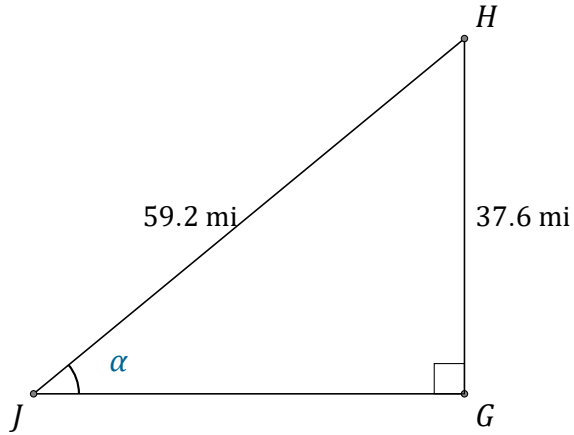


# Trigonometric Ratios (D)

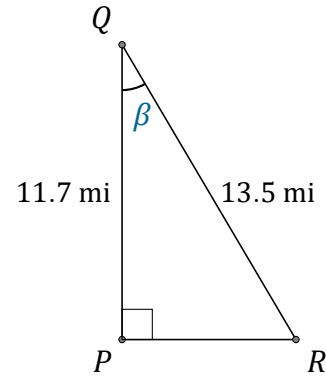
Name: \_\_\_\_\_

Date: \_\_\_\_\_

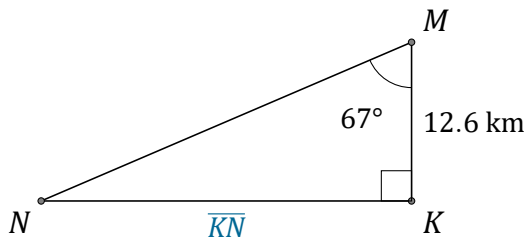
Calculate the angle and side values using trigonometric ratios



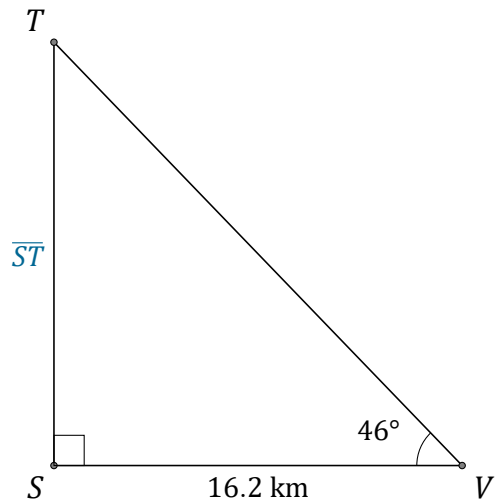
$\alpha = \angle GJH =$  \_\_\_\_\_



$\beta = \angle PQR =$  \_\_\_\_\_



$\overline{KN} =$  \_\_\_\_\_



$\overline{ST} =$  \_\_\_\_\_