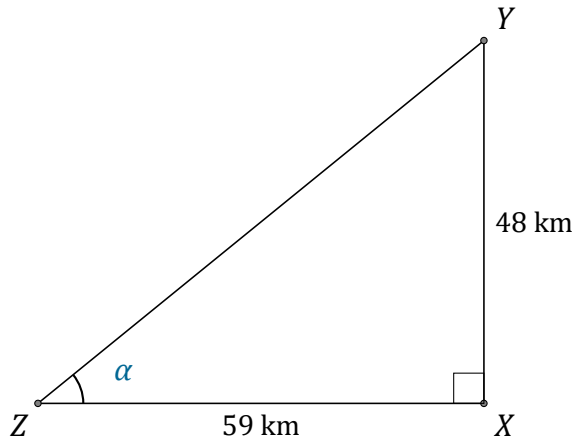


Trigonometric Ratios (C)

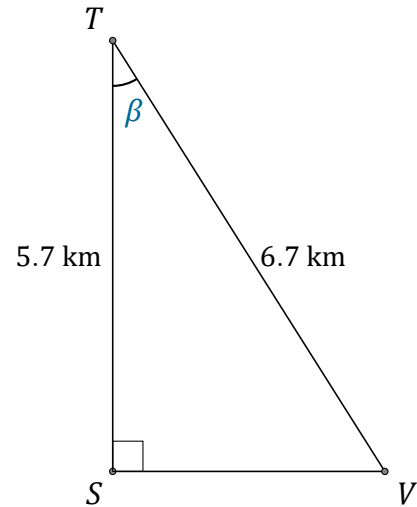
Name: _____

Date: _____

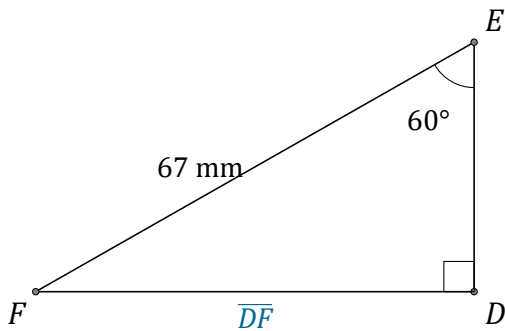
Calculate the angle and side values using trigonometric ratios



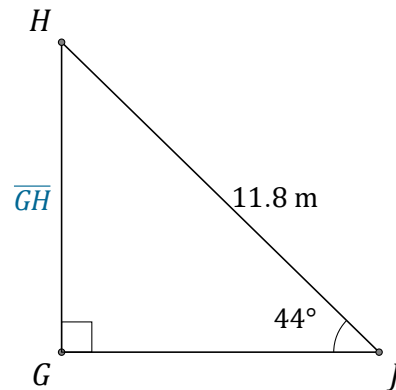
$$\alpha = \angle XZY = \underline{\hspace{2cm}}$$



$$\beta = \angle STV = \underline{\hspace{2cm}}$$



$$\overline{DF} = \underline{\hspace{2cm}}$$



$$\overline{GH} = \underline{\hspace{2cm}}$$