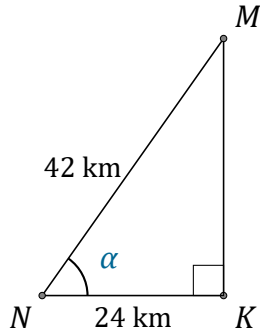


Trigonometric Ratios (B)

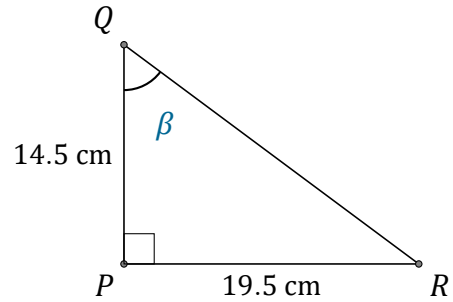
Name: _____

Date: _____

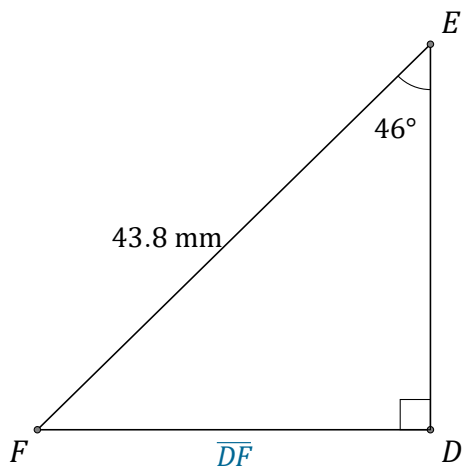
Calculate the angle and side values using trigonometric ratios



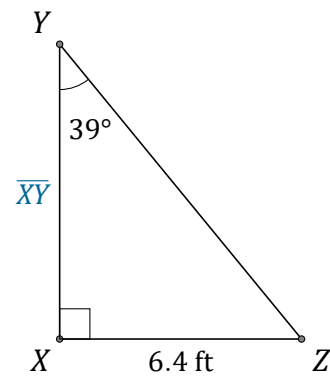
$\alpha = \angle KNM =$ _____



$\beta = \angle PQR =$ _____



$\overline{DF} =$ _____



$\overline{XY} =$ _____