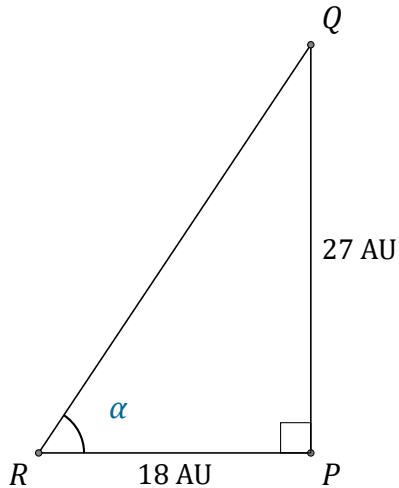


# Trigonometric Ratios (A)

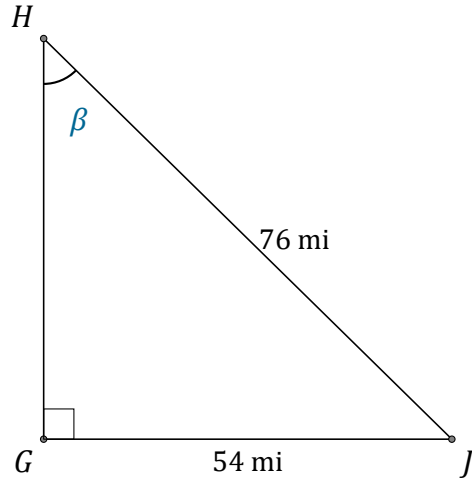
Name: \_\_\_\_\_

Date: \_\_\_\_\_

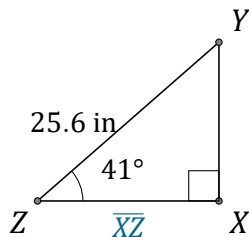
Calculate the angle and side values using trigonometric ratios



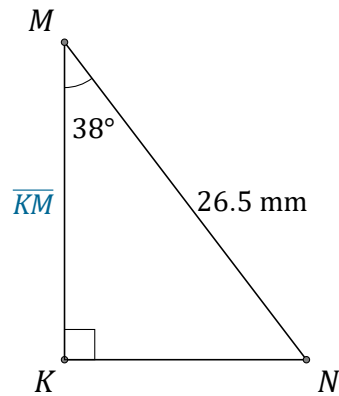
$$\alpha = \angle PRQ = \underline{\hspace{2cm}}$$



$$\beta = \angle GHJ = \underline{\hspace{2cm}}$$



$$\overline{XZ} = \underline{\hspace{2cm}}$$



$$\overline{KM} = \underline{\hspace{2cm}}$$