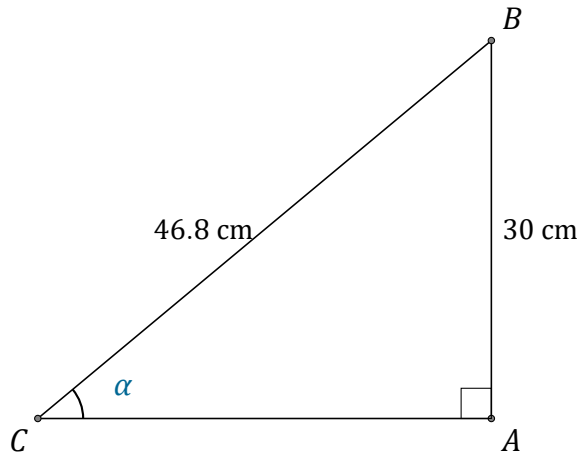


Trigonometric Ratios (I)

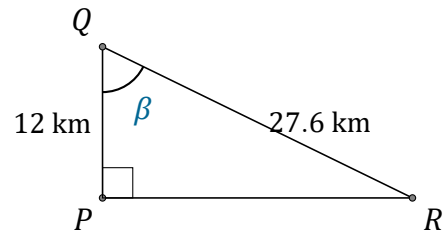
Name: _____

Date: _____

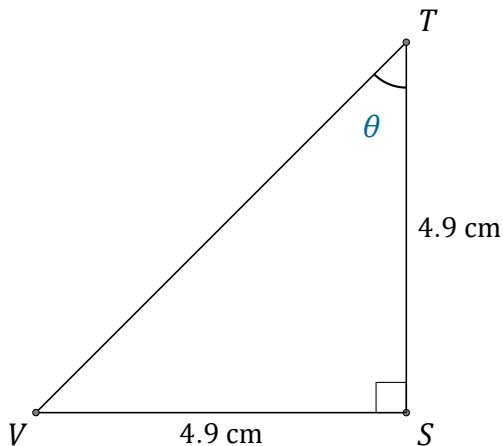
Calculate the angle values using trigonometric ratios



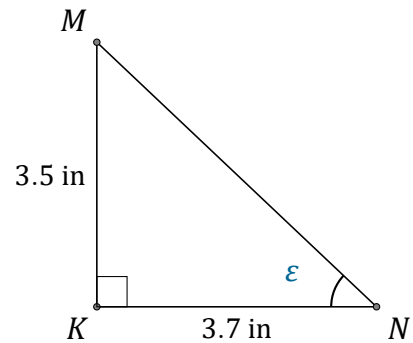
$$\alpha = \angle ACB = \underline{\hspace{2cm}}$$



$$\beta = \angle PQR = \underline{\hspace{2cm}}$$



$$\theta = \angle STV = \underline{\hspace{2cm}}$$



$$\epsilon = \angle KNM = \underline{\hspace{2cm}}$$