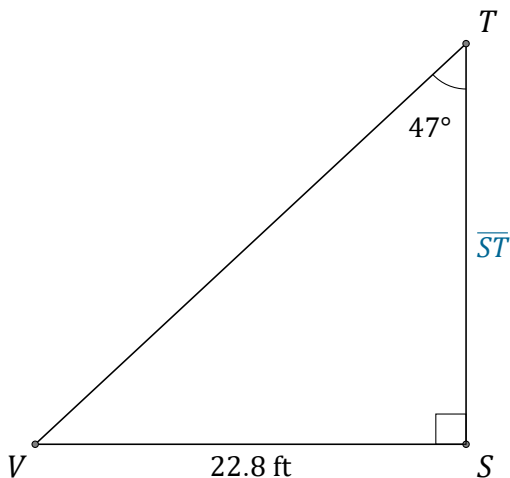


Tangent Ratio (G)

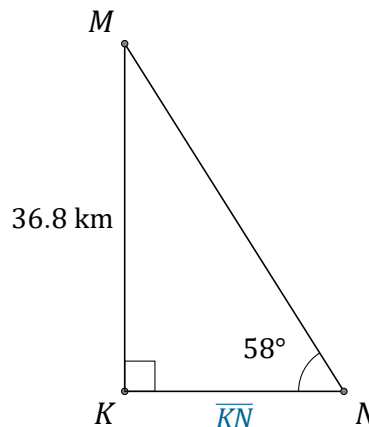
Name: _____

Date: _____

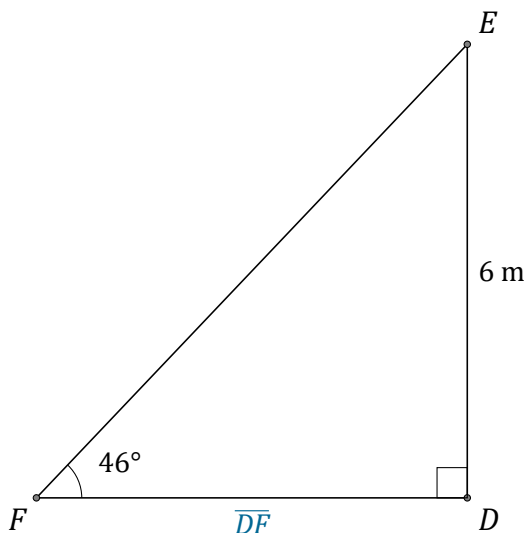
Calculate the side values using the tangent ratio: $\tan(\alpha) = \frac{O}{A}$



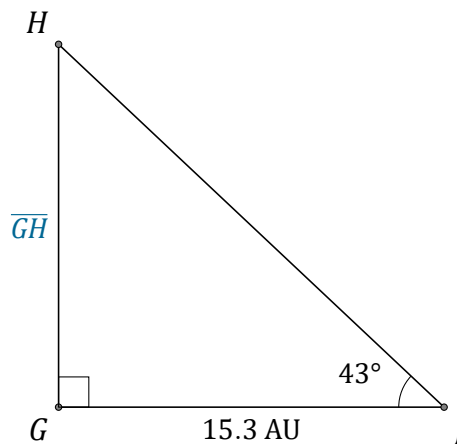
$\overline{ST} = \underline{\hspace{2cm}}$



$\overline{KN} = \underline{\hspace{2cm}}$



$\overline{DF} = \underline{\hspace{2cm}}$



$\overline{GH} = \underline{\hspace{2cm}}$