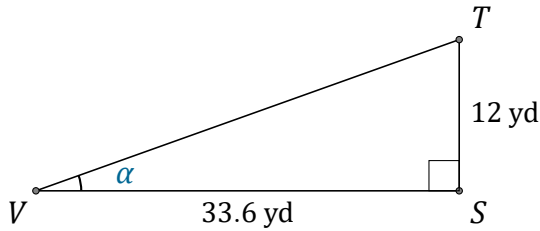


Tangent Ratio (J)

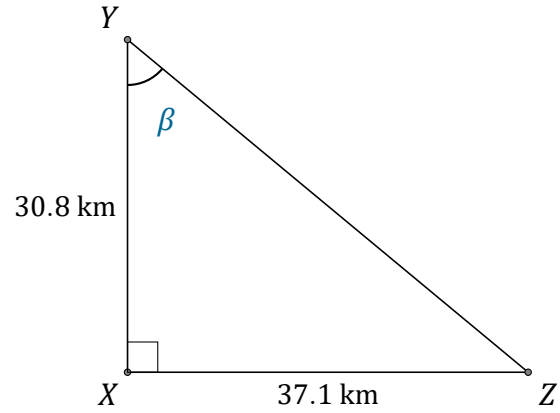
Name: _____

Date: _____

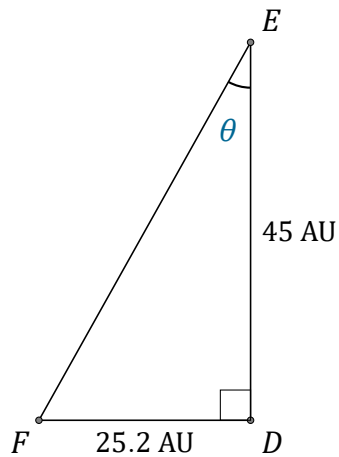
Calculate the angle values using the tangent ratio: $\tan(\alpha) = \frac{O}{A}$



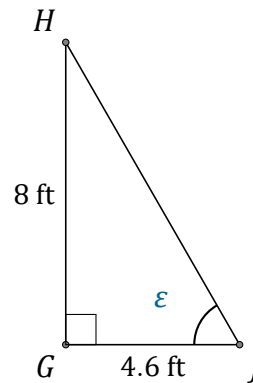
$$\alpha = \angle SVT = \underline{\hspace{2cm}}$$



$$\beta = \angle XYZ = \underline{\hspace{2cm}}$$



$$\theta = \angle DEF = \underline{\hspace{2cm}}$$



$$\epsilon = \angle GJH = \underline{\hspace{2cm}}$$