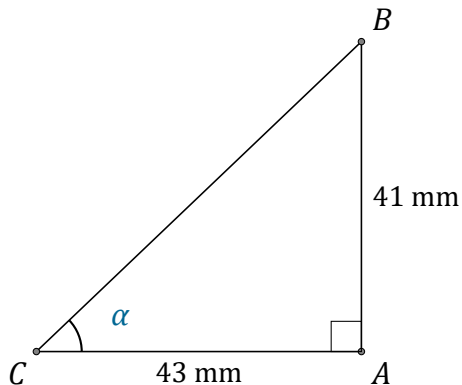


# Tangent Ratio (E)

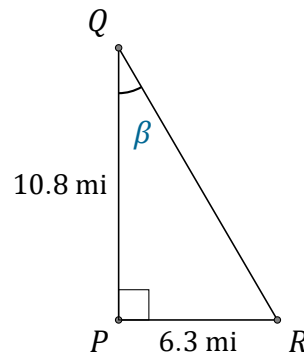
Name: \_\_\_\_\_

Date: \_\_\_\_\_

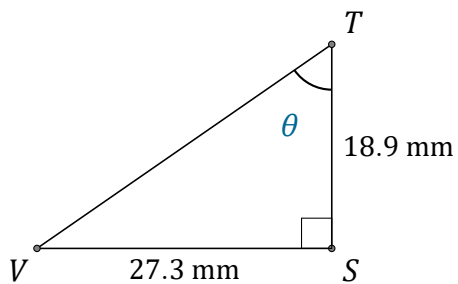
Calculate the angle values using the tangent ratio:  $\tan(\alpha) = \frac{O}{A}$



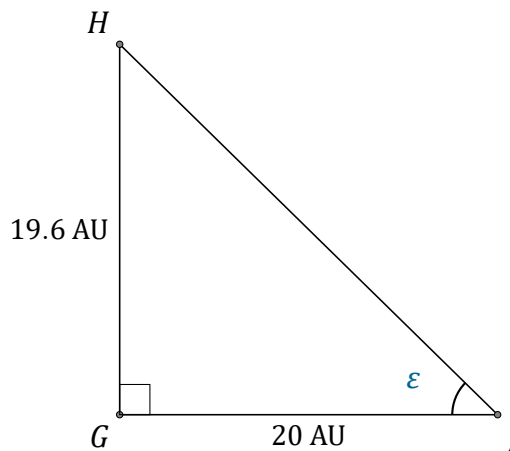
$\alpha = \angle ACB =$  \_\_\_\_\_



$\beta = \angle PQR =$  \_\_\_\_\_



$\theta = \angle STV =$  \_\_\_\_\_



$\epsilon = \angle GJH =$  \_\_\_\_\_