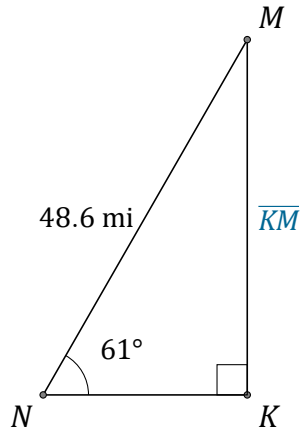


Sine Ratio (I)

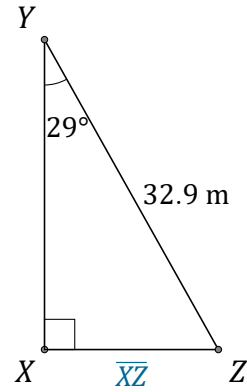
Name: _____

Date: _____

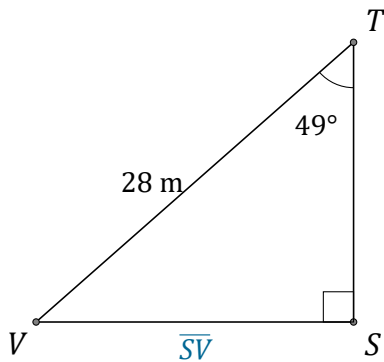
Calculate the side values using the sine ratio: $\sin(\alpha) = \frac{O}{H}$



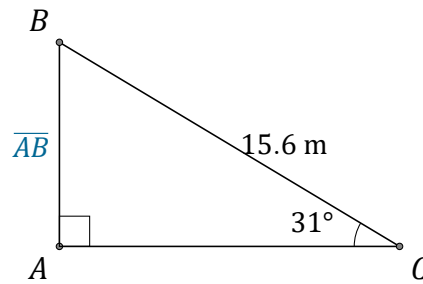
$\overline{KM} =$ _____



$\overline{XZ} =$ _____



$\overline{SV} =$ _____



$\overline{AB} =$ _____