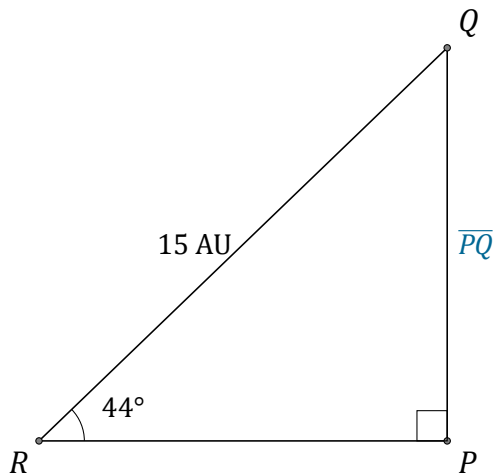


# Sine Ratio (C)

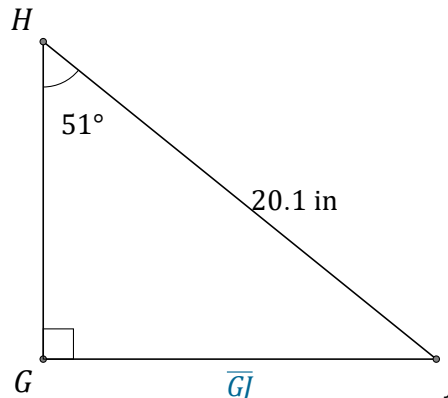
Name: \_\_\_\_\_

Date: \_\_\_\_\_

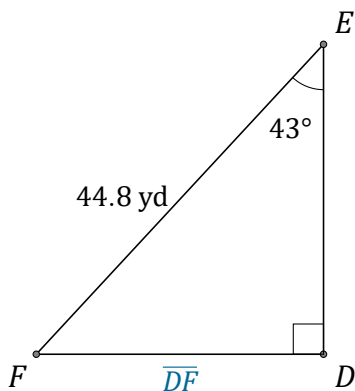
Calculate the side values using the sine ratio:  $\sin(\alpha) = \frac{O}{H}$



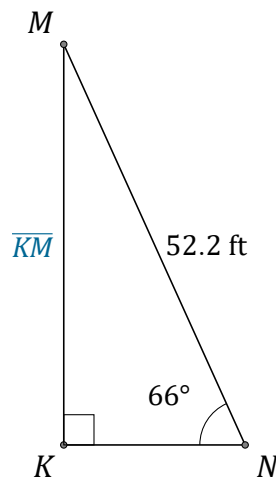
$\overline{PQ} =$  \_\_\_\_\_



$\overline{GJ} =$  \_\_\_\_\_



$\overline{DF} =$  \_\_\_\_\_



$\overline{KM} =$  \_\_\_\_\_