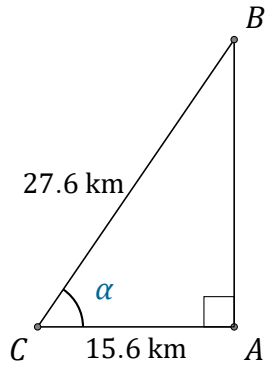


Cosine Ratio (I)

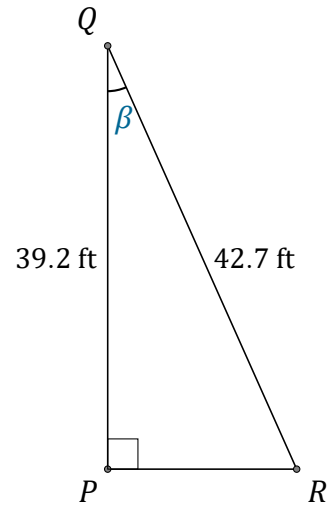
Name: _____

Date: _____

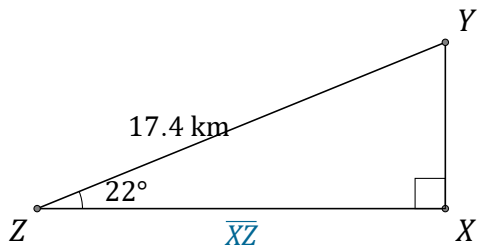
Calculate the angle and side values using the cosine ratio: $\cos(\alpha) = \frac{A}{H}$



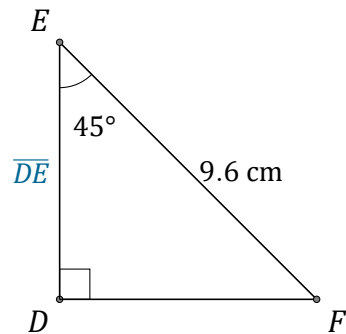
$$\alpha = \angle ACB = \underline{\hspace{2cm}}$$



$$\beta = \angle PQR = \underline{\hspace{2cm}}$$



$$\overline{XZ} = \underline{\hspace{2cm}}$$



$$\overline{DE} = \underline{\hspace{2cm}}$$