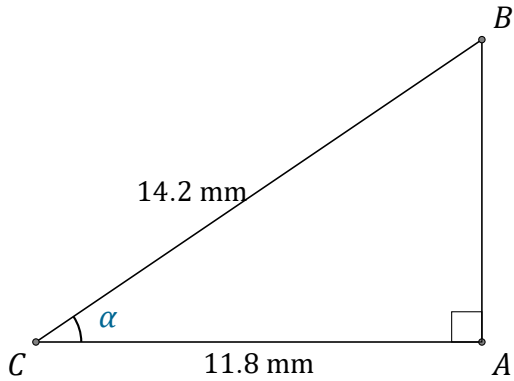


Cosine Ratio (B)

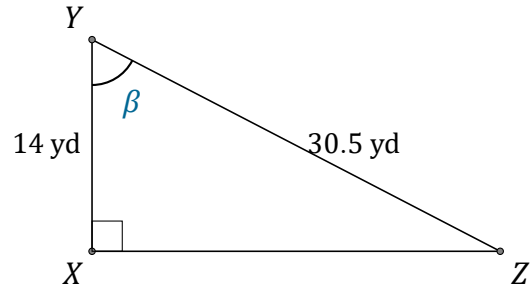
Name: _____

Date: _____

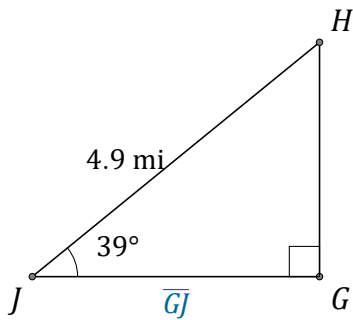
Calculate the angle and side values using the cosine ratio: $\cos(\alpha) = \frac{A}{H}$



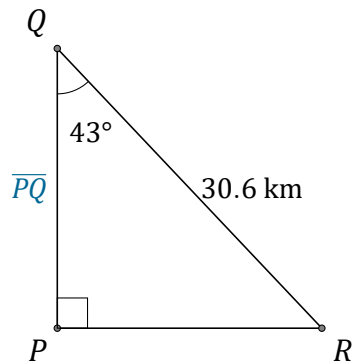
$\alpha = \angle ACB = \underline{\hspace{2cm}}$



$\beta = \angle XYZ = \underline{\hspace{2cm}}$



$\overline{GJ} = \underline{\hspace{2cm}}$



$\overline{PQ} = \underline{\hspace{2cm}}$