

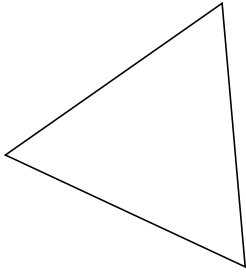
Classifying Triangles by Angle and Side Properties (I)

Name: _____

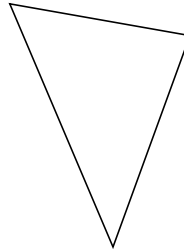
Date: _____

Classify each triangle using its angle and side properties.

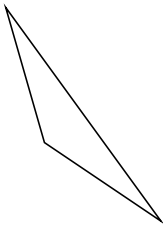
1.



2.



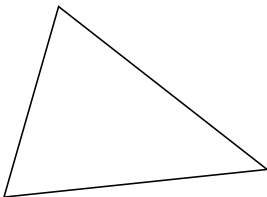
3.



4.



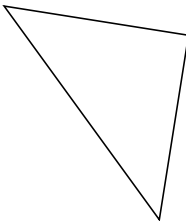
5.



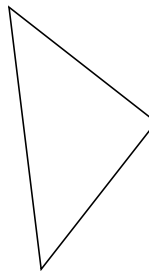
6.



7.



8.



9.



10.

