

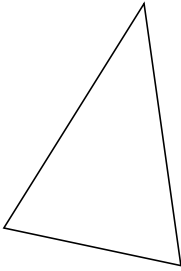
Classifying Triangles by Angle and Side Properties (H)

Name: _____

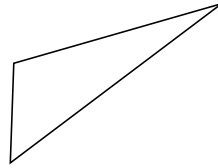
Date: _____

Classify each triangle using its angle and side properties.

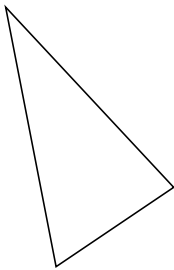
1.



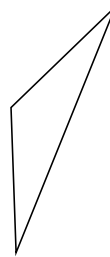
2.



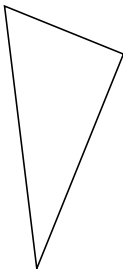
3.



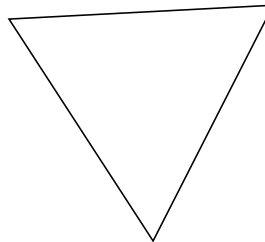
4.



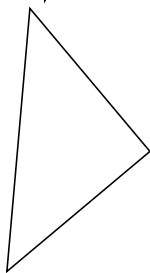
5.



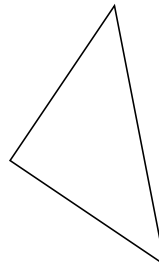
6.



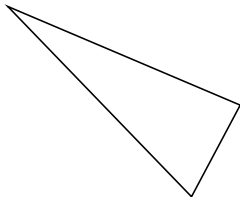
7.



8.



9.



10.

