

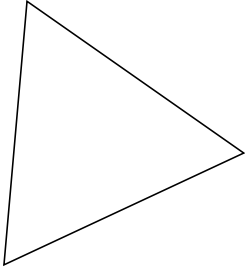
# Classifying Triangles by Angle Properties (H)

Name: \_\_\_\_\_

Date: \_\_\_\_\_

Classify each triangle using its angle properties.

1.



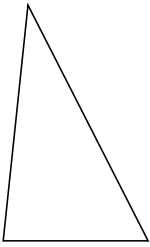
\_\_\_\_\_

2.



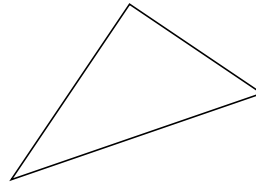
\_\_\_\_\_

3.



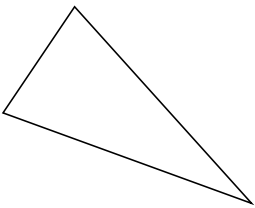
\_\_\_\_\_

4.



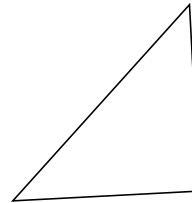
\_\_\_\_\_

5.



\_\_\_\_\_

6.




\_\_\_\_\_

7.



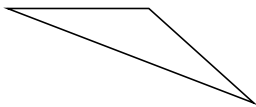
\_\_\_\_\_

8.



\_\_\_\_\_

9.



\_\_\_\_\_

10.



\_\_\_\_\_