

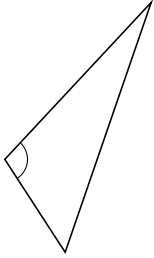
# Classifying Triangles by Angle Properties (I)

Name: \_\_\_\_\_

Date: \_\_\_\_\_

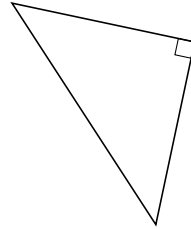
Classify each triangle using its angle properties.

1.



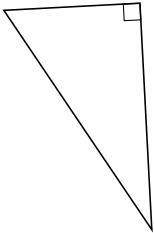
\_\_\_\_\_

2.



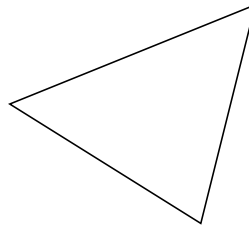
\_\_\_\_\_

3.



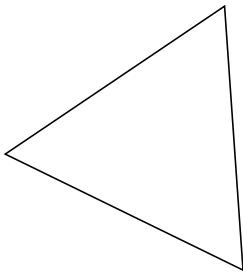
\_\_\_\_\_

4.



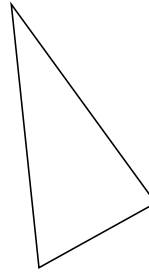
\_\_\_\_\_

5.



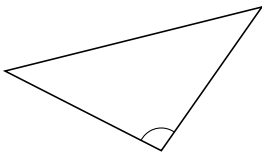
\_\_\_\_\_

6.



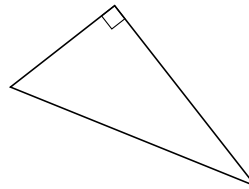
\_\_\_\_\_

7.



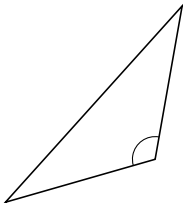
\_\_\_\_\_

8.



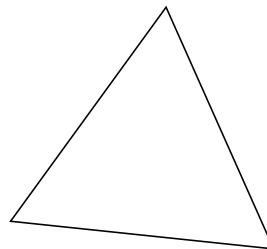
\_\_\_\_\_

9.



\_\_\_\_\_

10.



\_\_\_\_\_

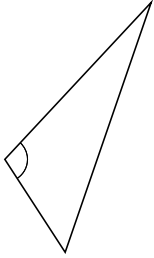
# Classifying Triangles by Angle Properties (I) Answers

Name: \_\_\_\_\_

Date: \_\_\_\_\_

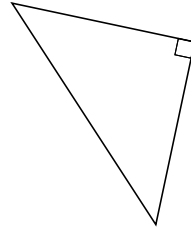
Classify each triangle using its angle properties.

1.



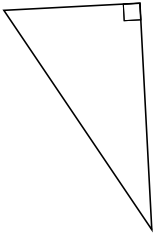
obtuse

2.



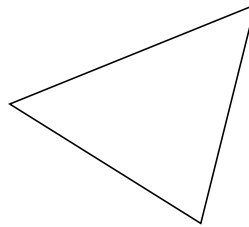
right

3.



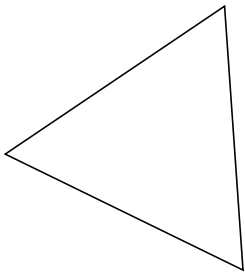
right

4.



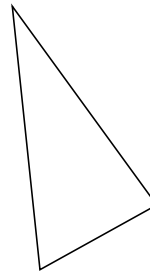
acute

5.



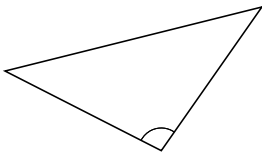
acute

6.



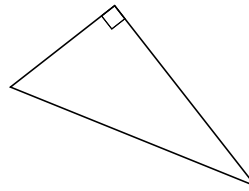
acute

7.



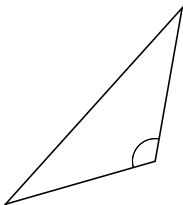
obtuse

8.



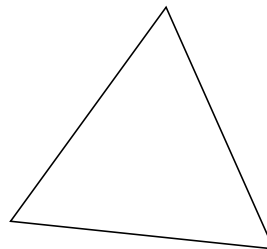
right

9.



obtuse

10.



acute