

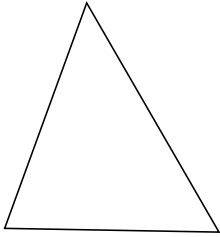
Classifying Triangles by Angle Properties (F)

Name: _____

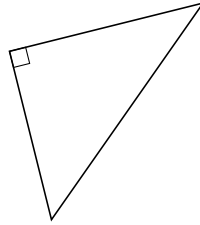
Date: _____

Classify each triangle using its angle properties.

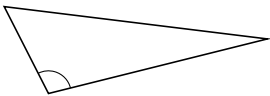
1.



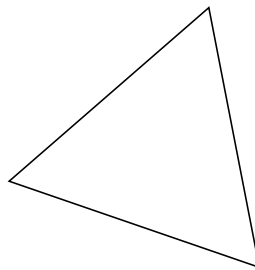
2.




3.



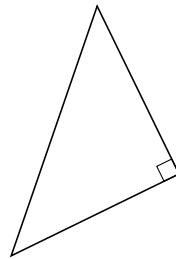
4.



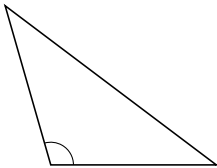
5.



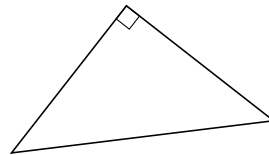
6.



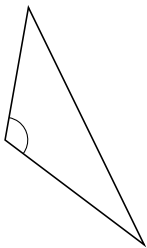
7.



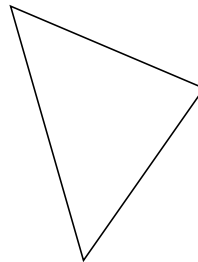
8.



9.



10.



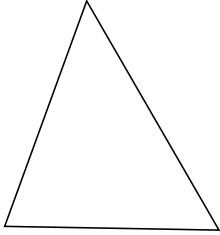
Classifying Triangles by Angle Properties (F) Answers

Name: _____

Date: _____

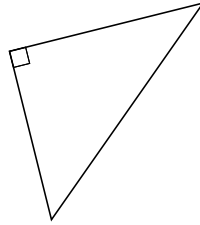
Classify each triangle using its angle properties.

1.



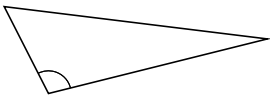
acute

2.



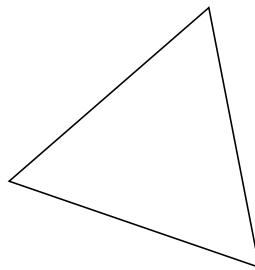
right

3.




obtuse

4.



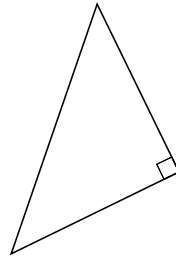
acute

5.



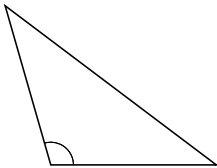
acute

6.



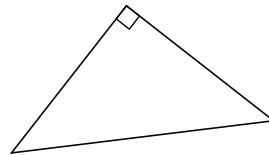
right

7.



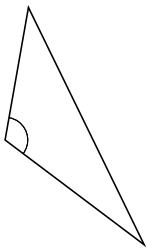
obtuse

8.



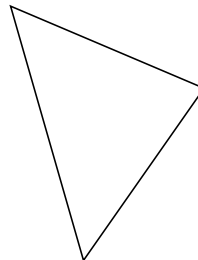
right

9.



obtuse

10.



acute