

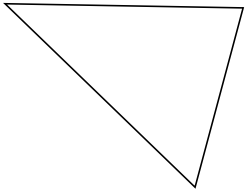
Classifying Triangles by Angle Properties (E)

Name: _____

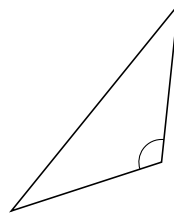
Date: _____

Classify each triangle using its angle properties.

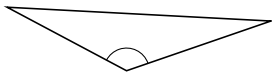
1.



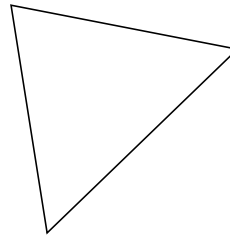
2.



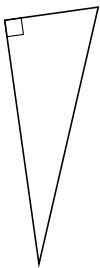
3.



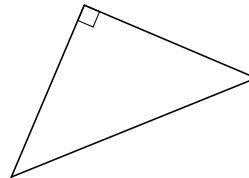
4.




5.



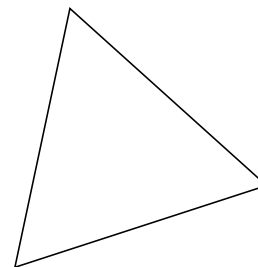
6.



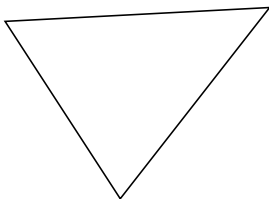
7.



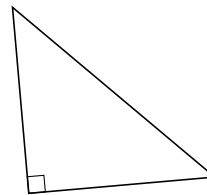
8.



9.



10.



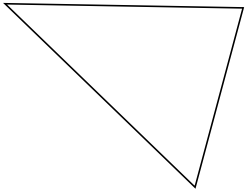
Classifying Triangles by Angle Properties (E) Answers

Name: _____

Date: _____

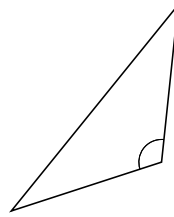
Classify each triangle using its angle properties.

1.



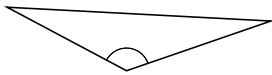
acute

2.




obtuse

3.



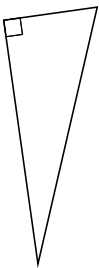
obtuse

4.



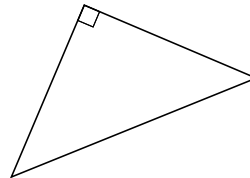
acute

5.




right

6.



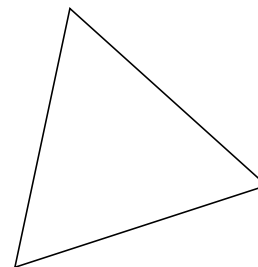
right

7.



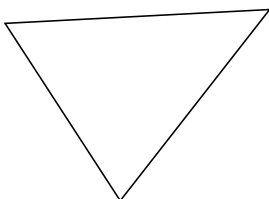
acute

8.



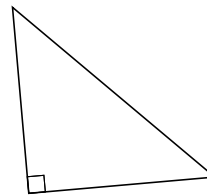
acute

9.



acute

10.



right