

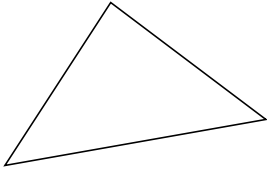
Classifying Triangles by Angle Properties (C)

Name: _____

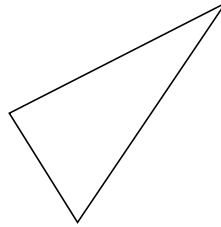
Date: _____

Classify each triangle using its angle properties.

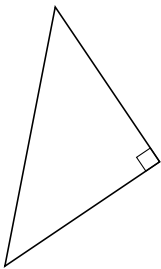
1.



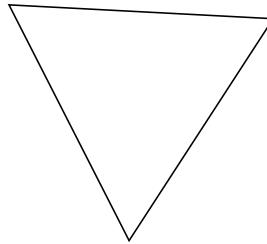
2.



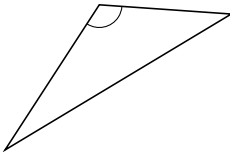
3.



4.



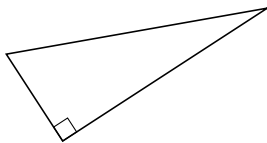
5.



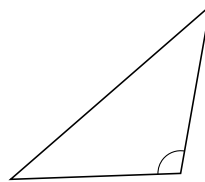
6.



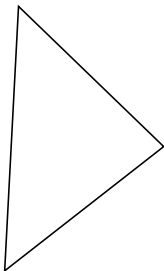
7.



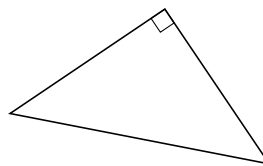
8.



9.



10.



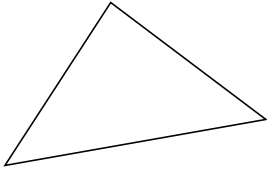
Classifying Triangles by Angle Properties (C) Answers

Name: _____

Date: _____

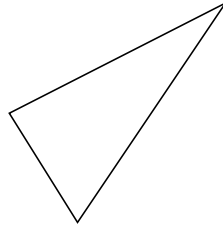
Classify each triangle using its angle properties.

1.



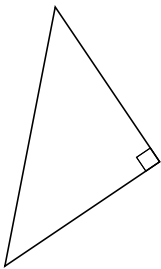
acute

2.



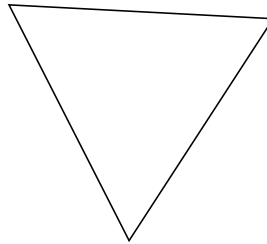
acute

3.



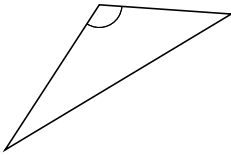
right

4.



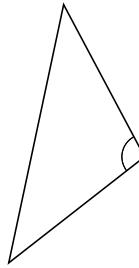
acute

5.



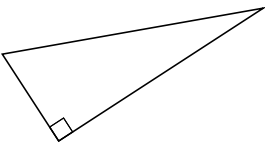
obtuse

6.



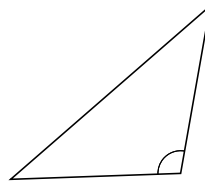
obtuse

7.



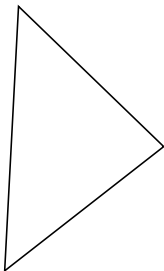
right

8.



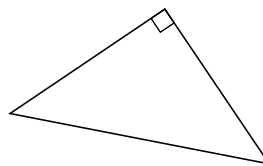
obtuse

9.



acute

10.



right