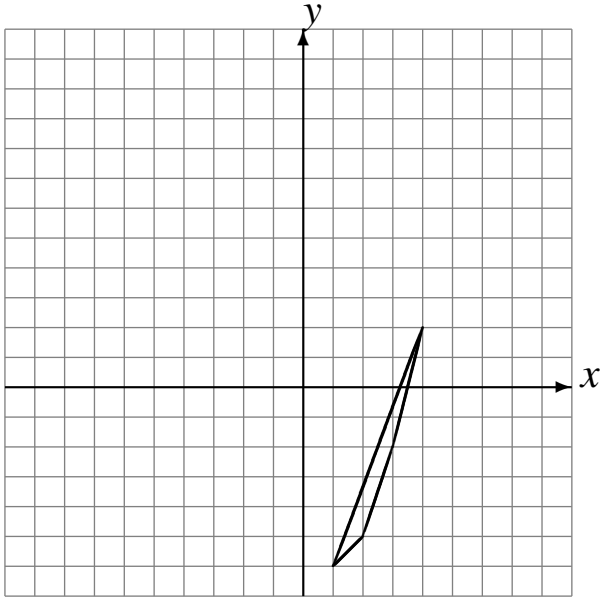


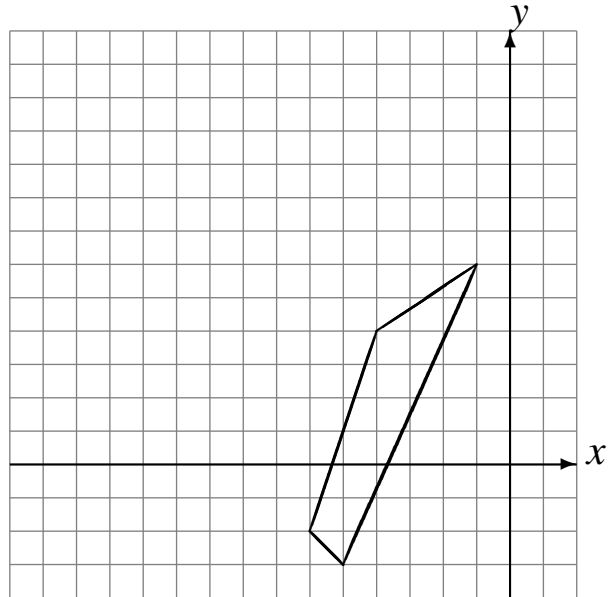
Translations (D)

Draw the intermediate and translated images.

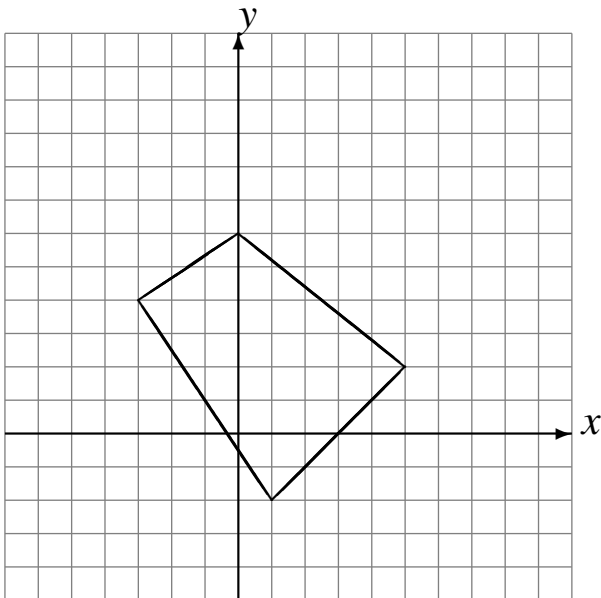
Translate by $(-2, 3)$.
Translate by $(-4, 0)$.
Translate by $(4, 6)$.



Translate by $(-1, 6)$.
Translate by $(-6, -4)$.
Translate by $(5, -1)$.



Translate by $(-2, 5)$.
Translate by $(4, -5)$.
Translate by $(-1, -2)$.



Translate by $(0, -3)$.
Translate by $(5, 6)$.
Translate by $(-6, -1)$.

