

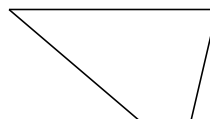
Classifying Quadrilaterals (E)

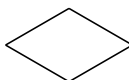
Identify each quadrilateral.










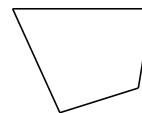






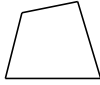






Classifying Quadrilaterals (E) Answers


Identify each quadrilateral.



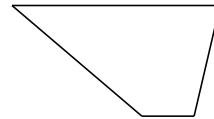
quadrilateral



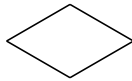
square



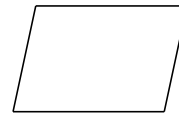
square




trapezoid



rhombus



parallelogram



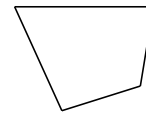
square



rectangle



parallelogram



quadrilateral