


## Classifying Quadrilaterals (D)

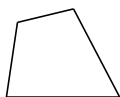
Identify each quadrilateral.



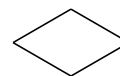
\_\_\_\_\_




\_\_\_\_\_



\_\_\_\_\_



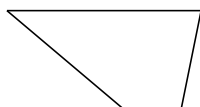
\_\_\_\_\_




\_\_\_\_\_



\_\_\_\_\_



\_\_\_\_\_



\_\_\_\_\_



\_\_\_\_\_



\_\_\_\_\_

# Classifying Quadrilaterals (D) Answers

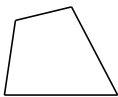
Identify each quadrilateral.



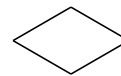
square




square



quadrilateral



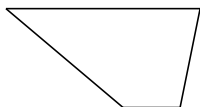
rhombus



square




rectangle



trapezoid



parallelogram



rectangle



square