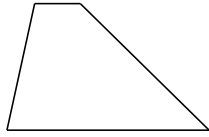
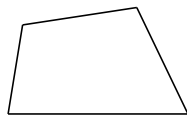


Classifying Quadrilaterals (C)

Identify each quadrilateral.

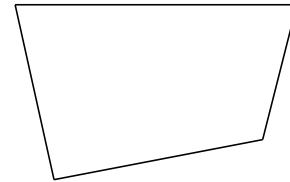















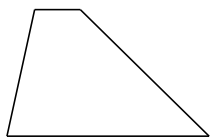




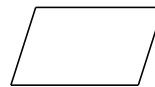


Classifying Quadrilaterals (C) Answers

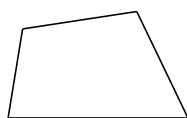
Identify each quadrilateral.



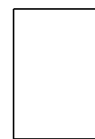
trapezoid



parallelogram



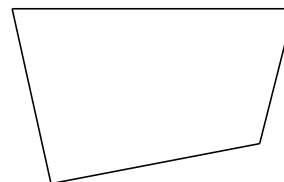
quadrilateral



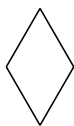
rectangle



square



quadrilateral



rhombus



rectangle



rectangle



quadrilateral